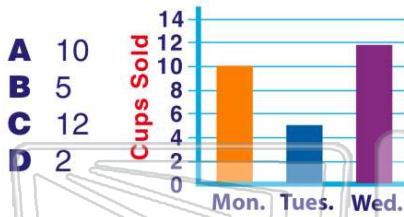




Name \_\_\_\_\_ Class \_\_\_\_\_ Date \_\_\_\_\_

1 How many **cups of lemonade** were sold on **Tuesday**?



2 How many **pens and pencils** were sold at the school store?

**A** 11  
**B** 5  
**C** 7  
**D** 12

| Items   | # Sold          |
|---------|-----------------|
| Pens    | /// / / /       |
| Pencils | /// / / / / /   |
| Folders | ◆ ◆ ◆ ◆ ◆ ◆ ◆ ◆ |

3 Read this graph about the snowfall for the weekend. The **most** snow fell on which day?

**A** Friday  
**B** Saturday

| Day      | Snowfall |
|----------|----------|
| Friday   | 6 inches |
| Saturday | 5 inches |

4 Which **school bus** has the **fewest** riders?



## PREVIEW

Please [Sign In](#) or [Sign Up](#) to download the printable version of this worksheet

**A** chocolate chip  
**B** peanut butter  
**C** sugar  
**D** chocolate

|                |    |
|----------------|----|
| Chocolate Chip | 32 |
| Peanut Butter  | 54 |
| Sugar          | 37 |
| Chocolate      | 39 |

**B** white  
**C** red  
**D** silver

|        |    |
|--------|----|
| Blue   | 6  |
| White  | 10 |
| Red    | 8  |
| Silver | 10 |

9 The chart shows how much business the girls' lemonade stand had. On which day did they sell the **most** lemonade?

**A** Monday  
**B** Tuesday  
**C** Wednesday  
**D** Thursday

| Day       | Cups Sold |
|-----------|-----------|
| Monday    | 8         |
| Tuesday   | 7         |
| Wednesday | 11        |

10 Read this chart about the most popular summer activities. How many **more** students liked swimming than biking?

**A** 2  
**B** 3  
**C** 4  
**D** 5

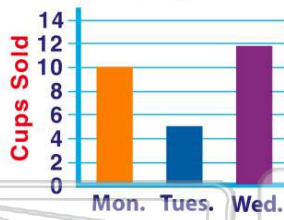
| Activity | # of Students |
|----------|---------------|
| Biking   | 4             |
| Hiking   | 5             |
| Swimming | 7             |



## ANSWER KEY

How many **cups of lemonade** were sold on **Tuesday**?

- A 10
- B 5
- C 12
- D 2



(b)

How many **pens and pencils** were sold at the school store?

- A 11
- B 5
- C 7
- D 12

| Items   | # Sold |
|---------|--------|
| Pens    | 5      |
| Pencils | 7      |
| Folders | 12     |

(a)

Read this graph about the snowfall for the weekend. The **most** snow fell on which day?

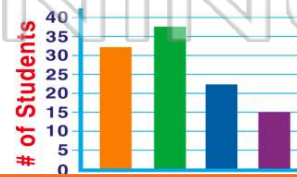
- A Friday
- B Saturday
- C Sunday

| Day      | Snowfall  |
|----------|-----------|
| Friday   | 6 inches  |
| Saturday | 5 inches  |
| Sunday   | 10 inches |

(c)

Which **school bus** has the **fewest** riders?

- A Bus 1
- B Bus 2
- C Bus 3
- D Bus 4



(d)



## PREVIEW

Please [Sign In](#) or [Sign Up](#) to download the printable version of this worksheet

- B peanut butter
- C sugar
- D chocolate

|               |    |
|---------------|----|
| Peanut Butter | 54 |
| Sugar         | 37 |
| Chocolate     | 39 |

- C red
- D silver

|        |    |
|--------|----|
| White  | 10 |
| Red    | 8  |
| Silver | 10 |

The chart shows how much business the girls' lemonade stand had. On which day did they sell the **most** lemonade?

- A Monday
- B Tuesday
- C Wednesday
- D Thursday

| Day       | Cups Sold |
|-----------|-----------|
| Monday    | 8         |
| Tuesday   | 7         |
| Wednesday | 11        |

(c)

Read this chart about the most popular summer activities. How many **more** students liked swimming than biking?

- A 2
- B 3
- C 4
- D 5

| Activity | # of Students |
|----------|---------------|
| Biking   | 4             |
| Hiking   | 5             |
| Swimming | 7             |

(b)