



Name \_\_\_\_\_ Class \_\_\_\_\_ Date \_\_\_\_\_

1 Which number is **less than** 385?

A B C D

3 Compare the numbers.  
25 26

A B C

2 Which number is the **least**?

	Hundreds	Tens	Ones
A 464	4	6	4
B 781	7	8	1
C 284	2	8	4
D 396	3	9	6

4 Which number sentence means  
302 is **greater than** 222?

- A  $302 < 222$
- B  $302 > 222$
- C  $302 = 222$



## PREVIEW

Please [Sign In](#) or [Sign Up](#) to download the printable version of this worksheet

- C  $479 < 435$
- D  $536 < 654$

- B 757
- C 123
- D 546



9  $180 < \square$

- A 182
- B 156
- C 176
- D 159



10 Compare the numbers.

571 574





A B C

greater than      less than      equal to



## ANSWER KEY

Which number is **less than 385**?

- A  **536**      C  **345**      (c)
- B  **737**      D  **388**

Which number is the **least**?

- A 464      (c)
- B 781
- C 284
- D 396
- | Hundreds | Tens | Ones |
|----------|------|------|
| 4        | 6    | 4    |
| 7        | 8    | 1    |
| 2        | 8    | 4    |
| 3        | 9    | 6    |

Compare the numbers.

25  26

- A  **>**      B  **<**      C  **=**
- greater      less than      equal to

Which number sentence means **302 is greater than 222**?

- A  $302 < 222$       (b)
- B  $302 > 222$
- C  $302 = 222$
- D  $302 + 222$

T  
G  
S  
g  
A  
E  
C  
D



## PREVIEW

Please [Sign In](#) or [Sign Up](#) to download the printable version of this worksheet

D  $536 < 654$

C 125  
D 546



180  

- A 182
- B 156
- C 176
- D 159



Compare the numbers.

571  574

- A  **>**      B  **<**      C  **=**
- greater than      less than      equal to