



Name \_\_\_\_\_ Class \_\_\_\_\_ Date \_\_\_\_\_

1 There are 36 \_\_\_\_\_ in one **yard**.

- A miles
- B inches
- C yards
- D feet



2 There are 12 \_\_\_\_\_ in one **foot**.

- A inches
- B miles
- C feet
- D yards

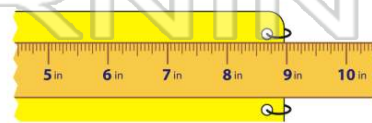


3 How **long** is the leaf?

- A 5 miles
- B 5 feet
- C 5 inches
- D 5 yards



4 How **wide** is the notebook?



- A 6 inches
- C 8 inches

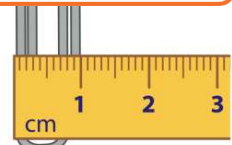


## PREVIEW

Please [Sign In](#) or [Sign Up](#) to download the printable version of this worksheet


7 \_\_\_\_\_  
B 2 gallons  
C They are the same amount.  
D More information is needed.

8 \_\_\_\_\_  
B 2 centimeters  
C 3 centimeters  
D 4 centimeters



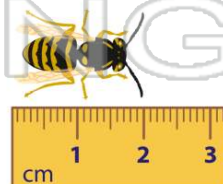
9 Measure the butterfly's **wingspan**.

- A 3 inches
- B 4 inches
- C 5 inches
- D 6 inches



10 How **long** is this bumblebee?

- A 1 centimeter
- B 2 centimeters
- C 3 centimeters
- D 4 centimeters





## ANSWER KEY

There are 36 \_\_\_\_\_ in one **yard**.

- A** miles
- B** inches
- C** yards
- D** feet



(b)

There are 12 \_\_\_\_\_ in one **foot**.

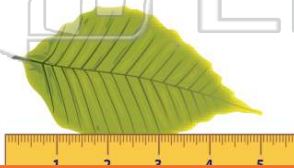
- A** inches
- B** miles
- C** feet
- D** yards



(a)

How **long** is the leaf?

- A** 5 miles
- B** 5 feet
- C** 5 inches
- D** 5 yards



(c)

How **wide** is the notebook?

- A** 6 inches
- B** 7 inches
- C** 8 inches
- D** 9 inches



(d)

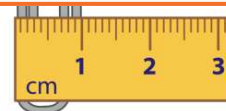


## PREVIEW

Please [Sign In](#) or [Sign Up](#) to download the printable version of this worksheet

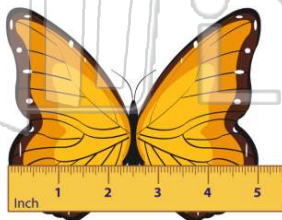
- C** They are the same amount.
- D** More information is needed.

- C** 3 centimeters
- D** 4 centimeters



Measure the butterfly's **wingspan**.

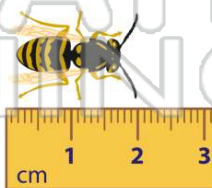
- A** 3 inches
- B** 4 inches
- C** 5 inches
- D** 6 inches



(c)

How **long** is this bumblebee?

- A** 1 centimeter
- B** 2 centimeters
- C** 3 centimeters
- D** 4 centimeters



(b)