




Name _____ Class _____ Date _____

1 Find the **length**.



- A $5\frac{1}{2}$ cm
- B 6 cm
- C $6\frac{1}{2}$ cm
- D 7 cm

3 If there are **2 pints in 1 quart**, then how many **pints** are in **5 quarts**?




- A 5 pints
- B 7 pints

2 Which is more, **6 cups** or **3 pints**?

1 pint = 2 cups

- A 6 cups
- B 3 pints
- C They are the same amount.

4 Using the ruler, decide the **length** of the grasshopper, in inches.



- A $\frac{1}{2}$ inches
- B 1 inches
- C $1\frac{1}{2}$ inches

5



PREVIEW

Please [Sign In](#) or [Sign Up](#) to download the printable version of this worksheet

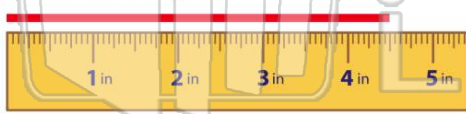
7

- C $4\frac{1}{2}$ inches
- D 5 inches



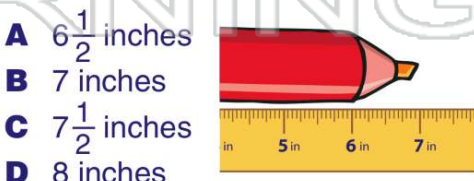
- A true
- B false

9 Find the **length**.



- A $3\frac{1}{2}$ inches
- B 4 inches
- C $4\frac{1}{2}$ inches
- D 5 inches

10 Using the ruler, decide how **long** the marker is, in inches.



- A $6\frac{1}{2}$ inches
- B 7 inches
- C $7\frac{1}{2}$ inches
- D 8 inches



ANSWER KEY

Find the **length**.



- A $5\frac{1}{2}$ cm
- B 6 cm
- C $6\frac{1}{2}$ cm
- D 7 cm



(a)

Which is more, **6 cups** or **3 pints**?

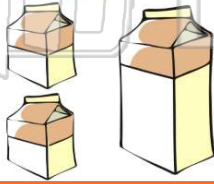
1 pint = 2 cups

- A 6 cups
- B 3 pints
- C They are the same amount.

(c)

If there are **2 pints in 1 quart**, then how many **pints** are in **5 quarts**?

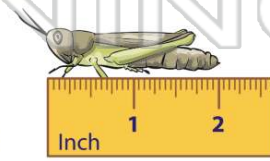
- A 5 pints
- B 7 pints
- C 8 pints



(d)

Using the ruler, decide the **length** of the grasshopper, in inches.

- A $\frac{1}{2}$ inches
- B 1 inches
- C $1\frac{1}{2}$ inches
- D 2 inches



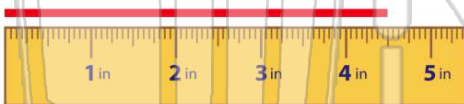
(d)



PREVIEW

Please [Sign In](#) or [Sign Up](#) to download the printable version of this worksheet

Find the **length**.

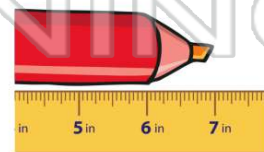


- A $3\frac{1}{2}$ inches
- B 4 inches
- C $4\frac{1}{2}$ inches
- D 5 inches

(c)

Using the ruler, decide how **long** the marker is, in inches.

- A $6\frac{1}{2}$ inches
- B 7 inches
- C $7\frac{1}{2}$ inches
- D 8 inches



(b)