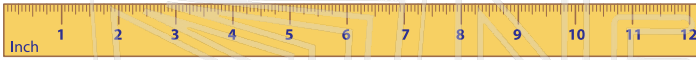


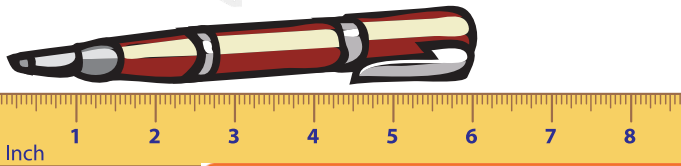


Name _____ Class _____ Date _____

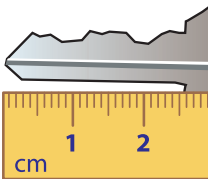
1 There are 12 _____ in one foot.



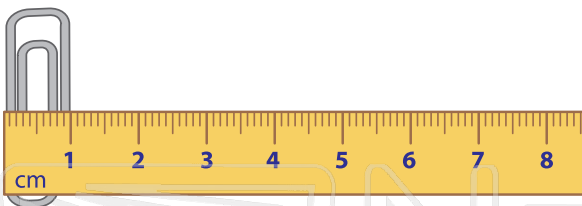
2 This pen is _____ inches long.



3 This key _____




4 The width _____ centimeters




5 Measure the butterfly's wingspan.

_____ inches



6 There are 16 ounces in 1 pound. How many ounces are there in 1/2 pound?

_____ ounces



7 If a sack of sugar weighs 4,000 grams, how many kilograms is it?

1,000 g = 1 kg




PREVIEW

Please [Sign In](#) or [Sign Up](#) to download the printable version of this worksheet

8 Grace has 1 quart of orange juice. How many pints of orange juice does Grace have?

1 quart = 2 pints



10 A 2 pound bag of candy contains how many ounces?

1 pound = 16 ounces

2 pounds = _____ ounces



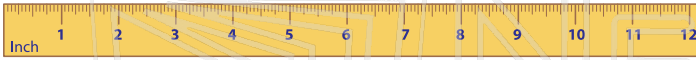


Measurement - Answer Key

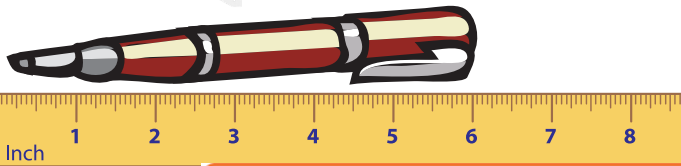
Math
C

Name _____ Class _____ Date _____

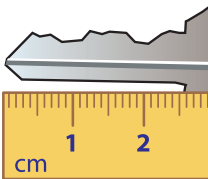
1 There are **12** inches in one foot.



2 This pen is **6** inches long.

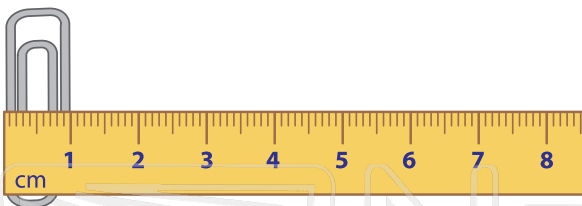


3 This key




4 The width

centimeter




5 Measure the butterfly's wingspan.

4
inches



6 There are **16** ounces in 1 pound. How many ounces are there in $\frac{1}{2}$ pound?

8 ounces



7 If a sack of sugar weighs 4,000 grams, how many kilograms is it?

1,000 g = 1 kg




PREVIEW

Please [Sign In](#) or [Sign Up](#) to download the printable version of this worksheet

8 Grace has 4 quarts of orange juice. How many pints of orange juice does Grace have?

1 quart = 2 pints

4 quarts = 8 pints



10 A 2 pound bag of candy contains how many ounces?

1 pound = 16 ounces

2 pounds = 32 ounces

