







Name \_\_\_\_\_ Class \_\_\_\_\_ Date \_\_\_\_\_

1 There are **10 cookies** in each package. There are **5 packages**.  
How many are in all?

- A  **20**
- B  **30**
- C  **40**
- D  **50**

3 Which multiplication fact is the same as  $2 \times 3 = 6$ ?

- A  $4 \times 5 = 20$
- B  $3 \times 2 = 6$
- C  $2 \times 6 = 12$

2 The clown has **2 groups** of balloons. There are **5** in each group.  
How many balloons are there?

- A  **5**
- B  **10**
- C  **15**
- D  **20**

4 Two friends each have **8 books**.  
How many books do they have all together?

- A 8
- B 12



5



## PREVIEW

Please [Sign In](#) or [Sign Up](#) to download the printable version of this worksheet

7


- A  **20**
- B  **26**
- C  **28**
- D  **32**

- A 1
- B 5
- C 15
- D 10



9

$4 \times 2 = 8$



10

$30 \times 5$





- A 120
- B 150
- C 300
- D 100









## ANSWER KEY

There are **10 cookies** in each package. There are **5 packages**.  
How many are in all?

- A       C       (d)
- B       D 

The clown has **2 groups** of balloons. There are **5** in each group.  
How many balloons are there?

- A       C       (b)
- B       D 

Which multiplication fact is the same as  $2 \times 3 = 6$ ?

- A  $4 \times 5 = 20$   
B  $3 \times 2 = 6$   
C  $2 \times 6 = 12$   
D  $3 \times 6 = 18$

(b)

Two friends each have **8 books**. How many books do they have all together?

- A 8  
B 12  
C 16



(c)



## PREVIEW



Please [Sign In](#) or [Sign Up](#) to download the printable version of this worksheet

- B       D 

- B 5  
C 15  
D 10



$$4 \times 2 = 8$$

- A       B       (a)

$$\begin{array}{r} 30 \\ \times 5 \\ \hline \end{array}$$

- A 120      C 300  
B 150      D 100



(b)