



Name _____ Class _____ Date _____

1

Multiply 40 by 8.

- A 40
- B 320
- C 360
- D 400


$$\begin{array}{r} 40 \\ \times 8 \\ \hline \end{array}$$



2

$$\square = 3 \times 9$$

- A 24
- B 27
- C 30
- D 18



3

Does $15 \times 6 = 80$?

- A **yes**
- B **no**

4

What is the product of 4 and 36?

- A 140
- B 144
- C 146
- D 120

$$\begin{array}{r} 36 \\ \times 4 \\ \hline \end{array}$$

5



PREVIEW

7

Please [Sign In](#) or [Sign Up](#) to download the printable version of this worksheet



9

$$\begin{array}{r} \$30 \\ \times 4 \\ \hline \end{array}$$

- A \$100
- B \$120
- C \$140
- D \$160



10

Which fact is the same as $5 \times 6 = 30$?

- A $6 \times 30 = 180$
- B $5 \times 30 = 150$
- C $5 \times 2 = 10$
- D $6 \times 5 = 30$






ANSWER KEY

Multiply 40 by 8.

- A 40
- B 320
- C 360
- D 400


$$\begin{array}{r} 40 \\ \times 8 \\ \hline \end{array}$$



(b)

$$\square = 3 \times 9$$

- A 24
- B 27
- C 30
- D 18



(b)

Does $15 \times 6 = 80$?

A

yes

B

no

(b)

What is the product of 4 and 36?

- A 140
- B 144
- C 146
- D 120

$$\begin{array}{r} 36 \\ \times 4 \\ \hline \end{array}$$

(b)

PREVIEW

Please [Sign In](#) or [Sign Up](#) to download the printable version of this worksheet

A




B



$$\begin{array}{r} \$30 \\ \times 4 \\ \hline \end{array}$$

- A \$100
- B \$120

- C \$140
- D \$160



(b)

Which fact is the same as $5 \times 6 = 30$?

- A $6 \times 30 = 180$
- B $5 \times 30 = 150$
- C $5 \times 2 = 10$
- D $6 \times 5 = 30$

(d)