







Name _____ Class _____ Date _____

1 Which number is the **same as** three hundred seventy-six?

- A  367
- B  376
- C  306
- D  76

3 Which number is the **same as** 400?

- A 400 ones
- B 4 tens
- C 4 thousands

2 Which number is the **same as** four hundred two?

- A 420
- B 422
- C 402
- D 42

4 What is the number for



$$300 + 50 + 3$$



PREVIEW

7 Please [Sign In](#) or [Sign Up](#) to download the printable version of this worksheet

- C 459 ones
- D 459 tens

- B 454
- C 50045
- D 45

9 What is the number for $400 + 50 + 2$?

- A 4,052
- B 452
- C 400,502
- D 425

10 Sarah's school has **five hundred thirty-six** students. How does she write that number?





- A 5,360
- B 563
- C 506
- D 536





ANSWER KEY

Which number is the **same as** three hundred seventy-six?

- A**  **C**  **(b)**
B  **D** 

Which number is the **same as** four hundred two?

- A** 420 **(c)**
B 422
C 402
D 42

Which number is the **same as** 400?

- A** 400 ones
B 4 tens
C 4 thousands
D 40 hundreds

What is the number for



- A** 3,053 **(d)** **C** 30,503



PREVIEW

Please [Sign In](#) or [Sign Up](#) to download the printable version of this worksheet

- D** 459 tens

- C** 50045
D 45

What is the number for $400 + 50 + 2$?

- A** 4,052 **(b)**
B 452
C 400,502
D 425

Sarah's school has **five hundred thirty-six** students. How does she write that number?

- A** 5,360 **(d)**
B 563
C 506
D 536

