



Name _____ Class _____ Date _____

1 What is the standard form for **six hundred seventy-five**?

- A 675
- B 765
- C 605
- D 6075

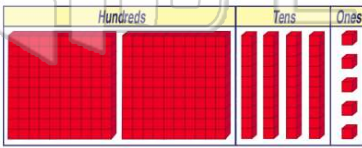
2 $600 + 80 + 3$ is the **same as** six hundred three?

- A true
- B false



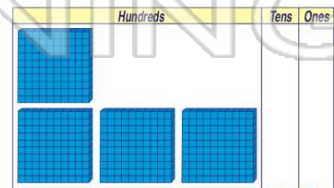
3 How many blocks?

- A 254
- B 542
- C 245
- D 425



4 What is the number?

- A 729
- B 972
- C 792
- D 927



PREVIEW

7 Please [Sign In](#) or [Sign Up](#) to download the printable version of this worksheet

- C $300 + 70 + 6$
- D $6 + 7 + 3$

- B 370
- C 307
- D 37

9 Which number is the **same as 600**?

- A 60 hundred
- B 60 ones
- C 6 tens
- D 60 tens

10 $400 + 50 =$ which number?

- A four hundred five
- B four hundred fifty
- C five hundred forty
- D four thousand fifty



ANSWER KEY

What is the standard form for **six hundred seventy-five**?

- A 675
- B 765
- C 605
- D 6075

(a)

$600 + 80 + 3$ is the **same as** six hundred three?

- A true
- B false

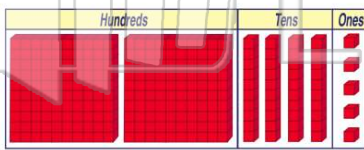


TRUE
or
FALSE?

(b)

How many blocks?

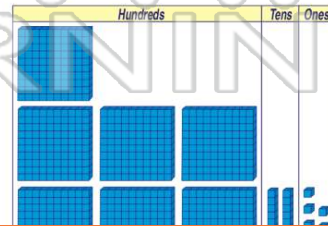
- A 254
- B 542
- C 245
- D 425



(c)

What is the number?

- A 729
- B 972
- C 792
- D 927



(a)



PREVIEW

Please [Sign In](#) or [Sign Up](#) to download the printable version of this worksheet

D $6 + 7 + 3$

C 307

D 37

Which number is the **same as 600**?

- A 60 hundred
- B 60 ones
- C 6 tens
- D 60 tens

(d)

$400 + 50 =$ which number?

- A four hundred five
- B four hundred fifty
- C five hundred forty
- D four thousand fifty

(b)