




Name \_\_\_\_\_ Class \_\_\_\_\_ Date \_\_\_\_\_

1 **645** is **even**.



A

B

3 \_\_\_\_\_ is an **even** number.



A

C

4 The **sum** of the first three odd numbers --1, 3, 5-- is \_\_\_\_\_.

- A 367, 689, 340
- B 245, 470, 376
- C 123, 249, 222
- D 237, 345, 679



A

B



## PREVIEW

7 Please [Sign In](#) or [Sign Up](#) to download the printable version of this worksheet



A

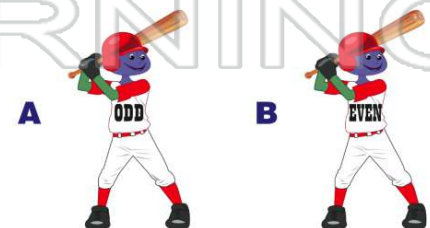
B

9 Finish the pattern.  
**5, 10, 15, 20,** \_\_\_\_\_  
Is the next number **odd** or **even**?

- A odd
- B even

- A 1
- B 3
- C 9
- D 4

10 Is **24,468** even or odd?




A

B



## ANSWER KEY

645 is even.



(b)

Which set has **only odd** numbers?

- A 367, 689, 340
- B 245, 470, 376
- C 123, 249, 222
- D 237, 345, 679

(d)

\_\_\_\_\_ is an even number.



(a)

The **sum** of the first three odd numbers -- 1, 3, 5 -- is \_\_\_\_\_.



(a)



## PREVIEW

Please [Sign In](#) or [Sign Up](#) to download the printable version of this worksheet



- A 1                      C 9
- B 3                      D 4

Finish the pattern.

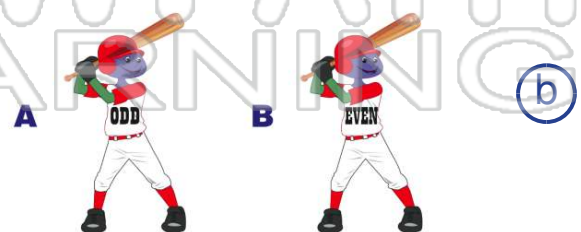
5, 10, 15, 20, \_\_\_\_\_

Is the next number **odd** or **even**?

- A odd
- B even

(a)

Is 24,468 even or odd?



(b)