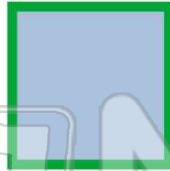




Name _____ Class _____ Date _____

1 The **perimeter** of this square is 36 cm. What is the length of one side?
_____cm

- A 4 cm
- B 8 cm
- C 9 cm
- D 36 cm



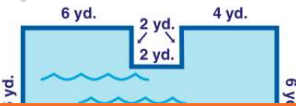
2 The **perimeter** of this square is 40 ft. How long is one side?

- A 4 ft.
- B 10 ft.
- C 20 ft.
- D 40 ft.



3 The Smith family has an odd shaped pool. What is the **perimeter** around their pool?

- A 24 yards
- B 36 yards



4 If one side of this square is 2 yards long, what is the **perimeter**?

- A 2 yards
- B 4 yards



PREVIEW

Please [Sign In](#) or [Sign Up](#) to download the printable version of this worksheet

- B 6 in.
- C 12 in.
- D 24 in.

5 in.

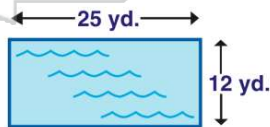


- B 24 cm
- C 28 cm
- D 70 cm



9 If a rectangular pool is 25 yards long and 12 yards wide, what is the **perimeter** around the pool?

- A 74 yards
- B 50 yards
- C 24 yards
- D 12 yards



10 Mr. Tomato needs a fence for his garden. If his rectangular garden is 15 feet long and 10 feet wide, how long should his fence be?

- A 50 ft.
- B 15 ft.
- C 10 ft.
- D 150 ft.

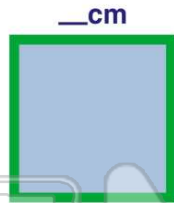




ANSWER KEY

The **perimeter** of this square is 36 cm. What is the length of one side?

- A 4 cm
- B 8 cm
- C 9 cm
- D 36 cm



(C)

The **perimeter** of this square is 40 ft. How long is one side?

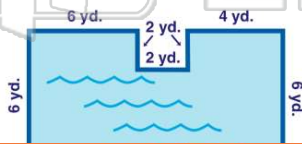
- A 4 ft.
- B 10 ft.
- C 20 ft.
- D 40 ft.



(b)

The Smith family has an odd shaped pool. What is the **perimeter** around their pool?

- A 24 yards
- B 36 yards
- C 40 yards



(C)

If one side of this square is 2 yards long, what is the **perimeter**?

- A 2 yards
- B 4 yards
- C 8 yards



(C)



PREVIEW

Please [Sign In](#) or [Sign Up](#) to download the printable version of this worksheet

- C 12 in.
- D 24 in.

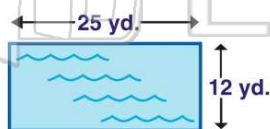


- C 28 cm
- D 70 cm



If a rectangular pool is 25 yards long and 12 yards wide, what is the **perimeter** around the pool?

- A 74 yards
- B 50 yards
- C 24 yards
- D 12 yards



(a)

Mr. Tomato needs a fence for his garden. If his rectangular garden is 15 feet long and 10 feet wide, how long should his fence be?

- A 50 ft.
- B 15 ft.
- C 10 ft.
- D 150 ft.



(a)