

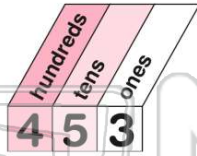


Name _____ Class _____ Date _____

1 Which number completes this number sentence?

$$453 = \square + 50 + 3$$

- A 40
- B 400
- C 4
- D 4,000



3 9 thousands, 3 hundreds, 5 tens, 7 ones = _____



4 In the number 2,564, what is the value of the 5?

- A 5 ones
- B 5 tens
- C 5 hundreds



ONES?

5

A banner featuring various educational icons (a cube, microscope, ruler, globe, atom, pie chart, bar graph, calculator) above a group of diverse children standing on a green field.

PREVIEW

7 Please [Sign In](#) or [Sign Up](#) to download the printable version of this worksheet

9

A 300 C 300

B 39 D 3,900

9 Which is the expanded form of 3,568?

- A $3,000 + 500 + 60 + 8$
- B $300 + 500 + 60 + 8$
- C $350 + 600 + 8$
- D $300 + 50 + 60 + 8$

10 Which number is in the tens place in the number 3,759?

A thousands
B hundreds
C tens
D ones

thous.	hundr.	tens	ones
3	7	5	9

- A
- B
- C
- D

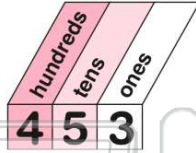


ANSWER KEY

Which number completes this number sentence?

$$453 = \square + 50 + 3$$

- A 40
- B 400
- C 4
- D 4,000



(b)

Which number is in the **ones** place?

1,657

- A 6
- B 5
- C 7
- D 1

ONES?

(c)

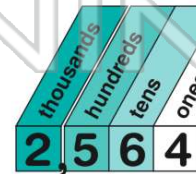
9 thousands, 3 hundreds, 5 tens, 7 ones =

- A
- B
- C
- D

(d)

In the number 2,564, what is the value of the 5?

- A 5 ones
- B 5 tens
- C 5 hundreds
- D 5 thousands



(c)



PREVIEW

Please [Sign In](#) or [Sign Up](#) to download the printable version of this worksheet

- B 39
- D 3,900

- B hundreds
 - C tens
 - D ones
- | | | | |
|----|---|----|---|
| th | h | te | o |
| 2 | 6 | 5 | 7 |

Which is the **expanded form** of 3,568?

- A $3,000 + 500 + 60 + 8$
- B $300 + 500 + 60 + 8$
- C $350 + 600 + 8$
- D $300 + 50 + 60 + 8$

(a)

Which number is in the **tens** place in the number 3,759?

- A
- B
- C
- D

(c)