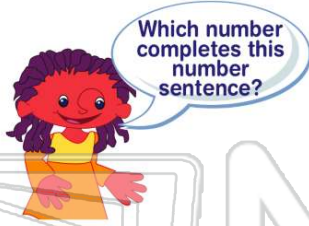




Name \_\_\_\_\_ Class \_\_\_\_\_ Date \_\_\_\_\_

1  $889 = 800 + \square + 9$

- A 80
- B 800
- C 8
- D 8,000



2 What number is in the **ones** place in the number 2,469?

- A 2
- B 4
- C 9
- D 6



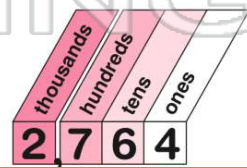
3 What number is in the **tens** place in the number 4,327?

- A 2
- B 3
- C 4



4 In the number 2,764, what is the value of the 2?

- A 2 ones
- B 2 tens
- C 2 hundreds



5



## PREVIEW

Please [Sign In](#) or [Sign Up](#) to download the printable version of this worksheet

7

- B 36
- C 306
- D 3,600



- B hundreds
- C tens
- D ones




9 Find the **expanded form** of 7,268?

- A  $7,000 + 200 + 60 + 8$
- B  $700 + 200 + 60 + 8$
- C  $720 + 600 + 8$
- D  $700 + 20 + 60 + 8$

10 Which number is in the **ones** place?

- A 3
- B 7
- C 5
- D 9





## ANSWER KEY

$889 = 800 + \square + 9$

- A 80
- B 800
- C 8
- D 8,000



Which number completes this number sentence?

(a)

What number is in the **ones** place in the number 2,469?

- A 2
- B 4
- C 9
- D 6



(c)

What number is in the **tens** place in the number 4,327?

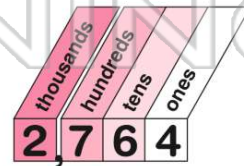
- A 2
- B 3
- C 4
- D 7

TENS?

(a)

In the number 2,764, what is the value of the 2?

- A 2 ones
- B 2 tens
- C 2 hundreds
- D 2 thousands



(d)



## PREVIEW

Please [Sign In](#) or [Sign Up](#) to download the printable version of this worksheet

- C 306
- D 3,600



- C tens
- D ones

2,637


Find the **expanded form** of 7,268?

- A  $7,000 + 200 + 60 + 8$
- B  $700 + 200 + 60 + 8$
- C  $720 + 600 + 8$
- D  $700 + 20 + 60 + 8$

(a)

Which number is in the **ones** place?

- A 3
- B 7
- C 5
- D 9



(d)