



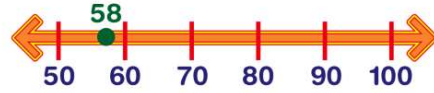
Name _____ Class _____ Date _____

1 The number 37 is **between** which two tens?

- A 20 and 30
- B 30 and 40
- C 7 and 30
- D 3 and 7

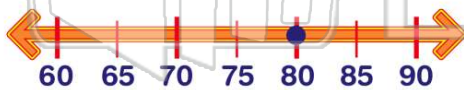
TENS?

2 What is 58 rounded to the **nearest ten**?

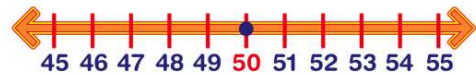


- A 50
- B 80
- C 60
- D 100

3 Which number rounds to 80?



4 Which number does **not** round to 50?



5



PREVIEW

Please [Sign In](#) or [Sign Up](#) to download the printable version of this worksheet

7

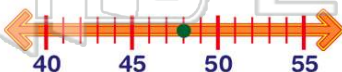
- C 30
- D 35

- B 357
- C 300
- D 348

9

What is \$48 rounded to the **nearest \$10**?

- A \$40
- B \$48
- C \$50
- D \$100



10 There are 156 ducks in the pond. What is 156 rounded to the **nearest ten**?

- A 100
- B 200
- C 150
- D 160





ANSWER KEY

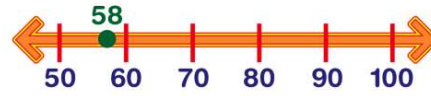
The number 37 is **between** which two tens?

- A 20 and 30
- B 30 and 40
- C 7 and 30
- D 3 and 7

TENS?

(b)

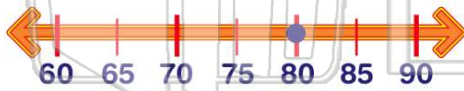
What is 58 rounded to the **nearest ten**?



(c)

- A 50
- B 80
- C 60
- D 100

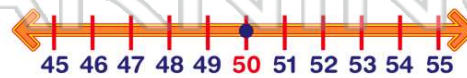
Which number rounds to 80?



(d)

- A 86
- C 45

Which number does **not** round to 50?



(c)

- A 45
- C 55



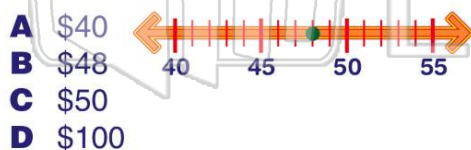
PREVIEW

Please [Sign In](#) or [Sign Up](#) to download the printable version of this worksheet

D 35

- C 300
- D 348

What is \$48 rounded to the **nearest \$10**?



(c)

- A \$40
- B \$48
- C \$50
- D \$100

There are 156 ducks in the pond. What is 156 rounded to the **nearest ten**?

- A 100
- B 200
- C 150
- D 160



(d)