



Name _____ Class _____ Date _____

1 There are 109 pencils in the box. What is **109** rounded to the **nearest ten**?

- A 100
- B 110
- C 200
- D 10



2 The race track was 268 feet long. What is **268** rounded to the **nearest ten**?

- A 267
- B 280
- C 270
- D 70



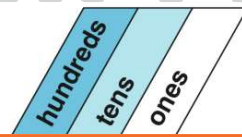
3 What is **584** rounded to the **nearest ten**?

- A 590
- B 550
- C 580

TENS?

4 _____ rounded to the **nearest ten** is 380.

- A 383
- B 387
- C 374



PREVIEW

Please [Sign In](#) or [Sign Up](#) to download the printable version of this worksheet

7

- B 780
- C 760
- D 770



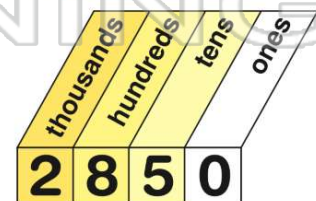
9 There are 325 fish in the pond. What is **325** rounded to the **nearest ten**?

- A 330
- B 320
- C 400
- D 300



10 _____ rounded to the **nearest ten** is **2,850**.

- A 2,842
- B 2,999
- C 3,000
- D 2,846





ANSWER KEY

There are 109 pencils in the box.
What is **109** rounded to the
nearest ten?

- A 100
- B 110
- C 200
- D 10



(b)

The race track was 268 feet long.
What is **268** rounded to the
nearest ten?

- A 267
- B 280
- C 270
- D 70



(c)

What is **584** rounded to the
nearest ten?

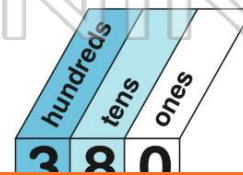
- A 590
- B 550
- C 580
- D 600

TENS?

(c)

_____ rounded to the
nearest ten is 380.

- A 383
- B 387
- C 374
- D 333



(a)



PREVIEW

Please [Sign In](#) or [Sign Up](#) to download
the printable version of this worksheet

- C 760
- D 770



There are 325 fish in the pond.
What is **325** rounded to the
nearest ten?

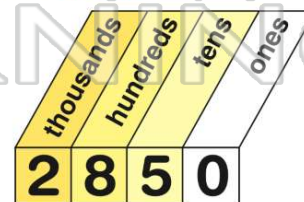
- A 330
- B 320
- C 400
- D 300



(a)

_____ rounded to the
nearest ten is **2,850**.

- A 2,842
- B 2,999
- C 3,000
- D 2,846



(d)