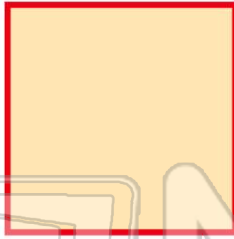




Name _____ Class _____ Date _____

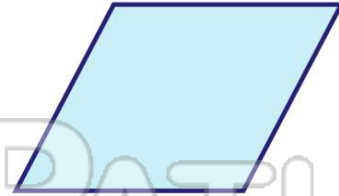
1 Name the figure.

- A square
- B triangle
- C circle
- D rhombus



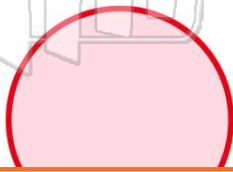
2 How many line segments does a **rhombus** have?

- A 2
- B 3
- C 4
- D 5



3 Is a circle a **polygon**?

- A yes
- B no



4 A **pentagon** has 5 sides.
True or false?



PREVIEW

Please [Sign In](#) or [Sign Up](#) to download the printable version of this worksheet





7

- B rhombus  D hexagon 

- B 3
- C 2
- D 5



9 Which shape cannot have a right angle?

- A triangle  C circle 
- B square  D rectangle 

10 Name the figure.

- A square
- B triangle
- C circle
- D cone






ANSWER KEY

Name the figure.

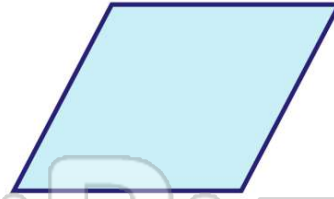
- A square
- B triangle
- C circle
- D rhombus



(a)

How many line segments does a **rhombus** have?

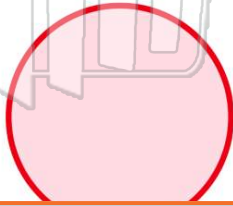
- A 2
- B 3
- C 4
- D 5



(c)

Is a circle a **polygon**?

- A yes
- B no



(b)

A **pentagon** has 5 sides.

True or false?



(a)



PREVIEW

Please [Sign In](#) or [Sign Up](#) to download the printable version of this worksheet

- B rhombus
- D hexagon

- C 2
- D 5



Which shape cannot have a right angle?

- A triangle
- C circle
- B square
- D rectangle

(c)

Name the figure.

- A square
- B triangle
- C circle
- D cone



(c)