



Name _____ Class _____ Date _____

1 This shape has **no corners**.
Name the shape.

A circle  C square 

B hexagon  D triangle 

3 A **right triangle** always has one right angle.
True or false?

A true



2 This shape has **three corners**.
What shape could it be?

A rectangle  C square 

B hexagon  D triangle 

4 How many angles does a **hexagon** have?

A 4
B 5
C 6



PREVIEW

Please [Sign In](#) or [Sign Up](#) to download the printable version of this worksheet

C rectangle 
D trapezoid 

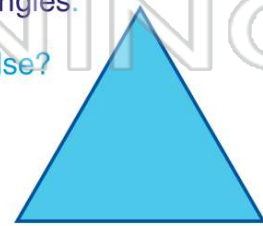
B 5 
C 6
D 7

9 Which shape has **more sides** than a square?

A rectangle 
B hexagon
C rhombus
D triangle

10 An **equilateral triangle** has 3 equal angles.
True or false?





A true
B false









ANSWER KEY

This shape has **no corners**.
Name the shape.

- A** circle  **C** square  **(a)**
- B** hexagon  **D** triangle 

This shape has **three corners**.
What shape could it be?

- A** rectangle  **C** square  **(d)**
- B** hexagon  **D** triangle 

A **right triangle** always has one right angle.

True or false?

- A** true
B false

How many angles does a **hexagon** have?

- A** 4
B 5
C 6
D 3




PREVIEW

Please [Sign In](#) or [Sign Up](#) to download the printable version of this worksheet

- D** trapezoid 

- C** 6
D 7

Which shape has **more** sides than a square?

- A** rectangle  **(b)**
- B** hexagon
C rhombus
D triangle

An **equilateral triangle** has 3 **equal** angles.

True or false?

- A** true
B false

