



Name _____ Class _____ Date _____

1 This party hat is an example of which solid?

- A cone
- B cube
- C cylinder
- D sphere



2 This solid has no flat faces.


What is it?

- A cone
- B cube
- C cylinder
- D sphere

3 This solid has 6 faces. They are not all the same size.

What is it?

- A sphere
- B cube



4 Four faces of this solid are triangles.

What is it?

- A pyramid
- B cube
- C cylinder

5



PREVIEW

Please [Sign In](#) or [Sign Up](#) to download the printable version of this worksheet

7

- B cylinder
- C cube
- D cone




- B cylinder
- C cube
- D sphere



9 A cereal box is an example of which solid?

- A sphere
- B cone
- C cylinder
- D rectangular prism



10 What is the name for the solid form of this can of soup?

- A cone
- B cube
- C cylinder
- D sphere





ANSWER KEY

This party hat is an example of which solid?

- A cone
- B cube
- C cylinder
- D sphere



(a)

This solid has no flat faces.

What is it?

- A cone
- B cube
- C cylinder
- D sphere

(d)

This solid has **6 faces**. They are not all the same size.

What is it?

- A sphere
- B cube
- C cylinder



(d)

Four faces of this solid are **triangles**.

What is it?

- A pyramid
- B cube
- C cylinder
- D sphere

(a)



PREVIEW

Please [Sign In](#) or [Sign Up](#) to download the printable version of this worksheet

- C cube
- D cone




- C cube
- D sphere



A cereal box is an example of which solid?

- A sphere
- B cone
- C cylinder
- D rectangular prism



(d)

What is the name for the solid form of this can of soup?

- A cone
- B cube
- C cylinder
- D sphere



(c)