



Name _____ Class _____ Date _____

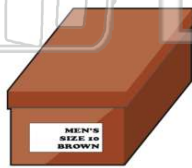
1 How many **faces** are there on the **eraser**?

- A 4
- B 5
- C 6
- D 8



3 What is the **solid** form of this **shoe box**?

- A cone
- B cube
- C cylinder



2 Debi visited Egypt. What **solid**, that is a famous landmark, could she have visited there?

- A sphere
- B square
- C cylinder
- D pyramid



4 A **globe** is an example of which **solid**?

- A sphere
- B cube
- C cylinder

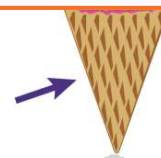


PREVIEW

7 Please [Sign In](#) or [Sign Up](#) to download the printable version of this worksheet


- A sphere
- B rectangular prism
- C cylinder
- D cone

- B rectangular prism
- C cylinder
- D cone



9 How many **edges** does the **cereal box** have?

- A 10
- B 12
- C 4
- D 16



10 What is the **solid** of the **megaphone** shown below?

- A cone
- B cube
- C cylinder
- D sphere





ANSWER KEY

How many **faces** are there on the **eraser**?

- A 4
- B 5
- C 6
- D 8



(c)

Debi visited Egypt. What **solid**, that is a famous landmark, could she have visited there?

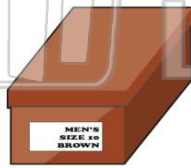
- A sphere
- B square
- C cylinder
- D pyramid



(d)

What is the **solid** form of this **shoe box**?

- A cone
- B cube
- C cylinder
- D rectangular prism



(d)

A **globe** is an example of which **solid**?

- A sphere
- B cube
- C cylinder
- D cone



(a)



PREVIEW

Please [Sign In](#) or [Sign Up](#) to download the printable version of this worksheet


- B rectangular prism
- C cylinder
- D cone

- C cylinder
- D cone



How many **edges** does the **cereal box** have?

- A 10
- B 12
- C 4
- D 16



(b)

What is the **solid** of the **megaphone** shown below?

- A cone
- B cube
- C cylinder
- D sphere



(a)