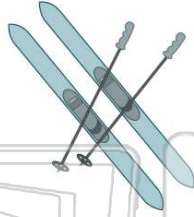




Name _____ Class _____ Date _____

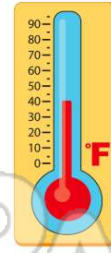
1 Ryan and Steve like to ski. Which **temperature** is best for skiing?

- A 1°F
- B 32°F
- C 75°F
- D 90°F



2 The **temperature** is ____° F.

- A 40
- B 45
- C 50
- D 55



3 It is 40°C outside. Does Maya need to wear a coat?

- A yes
- B no



4 The temperature is 0°C. Which does Olivia need to wear outside?



5



PREVIEW

7

Please [Sign In](#) or [Sign Up](#) to download the printable version of this worksheet

- C 5
- D 0

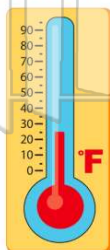


- C 55
- D 50



9 The **thermometer** shows ____° F.

- A 45
- B 35
- C 25
- D 15



10 It is ____° F.

- A 40
- B 50
- C 60
- D 70






ANSWER KEY

Ryan and Steve like to ski. Which **temperature** is best for skiing?


- A 1°F
- B 32°F
- C 75°F
- D 90°F



(b)

The **temperature** is ___ ° F.

- A 40
- B 45
- C 50
- D 55



(a)

It is 40°C outside. Does Maya need to wear a coat?

- A yes
- B no



(b)

The temperature is 0°C. Which does Olivia need to wear outside?

A



C



(d)

B



D



PREVIEW

Please [Sign In](#) or [Sign Up](#) to download the printable version of this worksheet

D 0

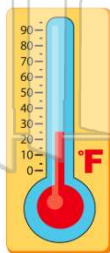


D 50



The **thermometer** shows ___ ° F.

- A 45
- B 35
- C 25
- D 15



(c)

It is ___ ° F.

- A 40
- B 50
- C 60
- D 70



(c)