



Name _____ Class _____ Date _____


1 What time is it?

A 12:00
B 12:05
C 1:00
D 5:12




2 What time is it?

A 4:10
B 4:22
C 2:20
D 2:22




3 What time is it?

A 7:48
B 8:47
C 9:38
D 9:40



4 What time is it?

A 1:16
B 1:20
C 3:00
D 3:05



PREVIEW

7 Please [Sign In](#) or [Sign Up](#) to download the printable version of this worksheet

C 5:31
D 5:32



C 9:32
D 9:34







9 What time is it?

A 7:17
B 7:23
C 5:36
D 5:38



10 Which clock shows 8:58?

A  **C** 

B  **D** 



ANSWER KEY

What time is it?

- A 12:00
- B 12:05
- C 1:00
- D 5:12



(b)

What time is it?

- A 4:10
- B 4:22
- C 2:20
- D 2:22



(d)

What time is it?

- A 7:48
- B 8:47
- C 9:38
- D 9:40



(c)

What time is it?

- A 1:16
- B 1:20
- C 3:00
- D 3:05



(a)



PREVIEW

Please [Sign In](#) or [Sign Up](#) to download the printable version of this worksheet

D 5:32



D 9:34





What time is it?



- A 7:17
- B 7:23
- C 5:36
- D 5:38



(b)

Which clock shows 8:58?

A  C 

B  D 

(c)