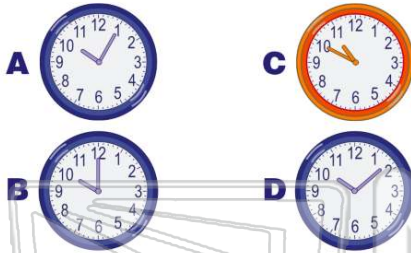




Name \_\_\_\_\_ Class \_\_\_\_\_ Date \_\_\_\_\_

1 Which clock shows **10:08**?



3 Which shows **1:24**?



5



## PREVIEW

Please [Sign In](#) or [Sign Up](#) to download the printable version of this worksheet

7

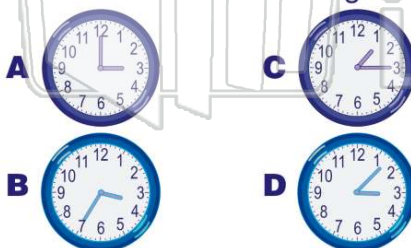
C 4:13  
D 4:20




C 5:28  
D 8:30



9 Choose the clock showing **3:07**.



10 Which clock shows **7:46**?





## ANSWER KEY

Which clock shows **10:08**?



(d)



What time is it?

- A** 6:58
- B** 7:00
- C** 11:33
- D** 11:35



(c)

Which shows **1:24**?



(c)



Choose the clock showing **2:45**.



(b)



## PREVIEW

Please [Sign In](#) or [Sign Up](#) to download the printable version of this worksheet

**D** 4:20



**D** 8:30



Choose the clock showing **3:07**.



(d)



Which clock shows **7:46**?



(c)

