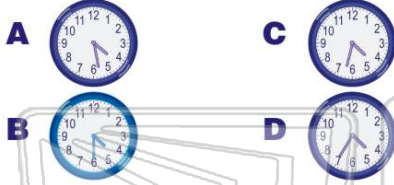




Name \_\_\_\_\_ Class \_\_\_\_\_ Date \_\_\_\_\_

1 Jimmy has soccer practice at **4:30**. He is **two minutes** early. Which clock shows what time it is?



2 Sara has her trumpet lesson at **9:30**. It takes her **seven minutes** to get there. What time should Sara leave?

- A 9:20
- B 9:23
- C 9:30
- D 9:35

3 Ben's party is at **5:00**. It takes Janie **13 minutes** to get to his house. What time should Janie leave to go to Ben's?

- A 5:30
- C 4:30

4 Zack and Alex are going to see a movie. The movie starts at **7:50**. What time should they arrive at the movie theater so that they do not miss any of the movie?

5



## PREVIEW

7

Please [Sign In](#) or [Sign Up](#) to download the printable version of this worksheet

- A 2:22
- B 2:30
- C 2:38
- D 2:45

- A 6:16
- B 6:30
- C 6:36
- D 6:46

9 Jeff can run a mile in **six minutes**. If he starts at **11:00**, what time will he finish the mile?




10 Frank is supposed to be at school by **9:45**. He left his house **seven minutes** late. What time will Frank arrive at school?

- A 9:45
- B 9:52
- C 10:55
- D 11:00



## ANSWER KEY

Jimmy has soccer practice at **4:30**. He is **two minutes** early. Which clock shows what time it is?



Sara has her trumpet lesson at **9:30**. It takes her **seven minutes** to get there. What time should Sara leave?

- A** 9:20                      **C** 9:30  
**B** 9:23                      **D** 9:35

Ben's party is at **5:00**. It takes Janie **13 minutes** to get to his house. What time should Janie leave to go to Ben's?

- A** 5:30                      **C** 4:30  
**B** 5:00                      **D** 4:47

Zack and Alex are going to see a movie. The movie starts at **7:50**. What time should they arrive at the movie theater so that they do not miss any of the movie?

- A** 8:02                      **C** 7:45



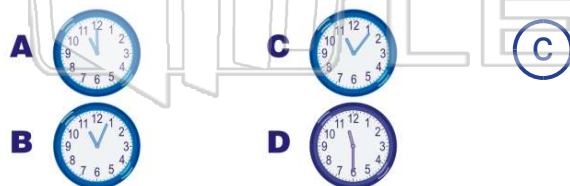
## PREVIEW

Please [Sign In](#) or [Sign Up](#) to download the printable version of this worksheet

- A** 2:22                      **C** 2:38  
**B** 2:30                      **D** 2:45

- A** 6:16                      **C** 6:36  
**B** 6:30                      **D** 6:46

Jeff can run a mile in **six minutes**. If he starts at **11:00**, what time will he finish the mile?



Frank is supposed to be at school by **9:45**. He left his house **seven minutes** late. What time will Frank arrive at school?

- A** 9:45                      **C** 10:55  
**B** 9:52                      **D** 11:00