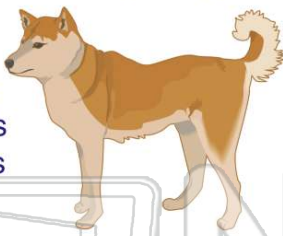




Name _____ Class _____ Date _____


1 How much could Denny's dog weigh?

A 20 inches
B 20 pounds
C 20 ounces
D 20 ton




2 My desk is about _____ tall.

A 2 inches
B 2 feet
C 2 miles
D 2 pounds




3 Ken bought a new basketball. How much might it weigh?

A 1 inch
B 1 pound
C 1 ounce



4 Which unit of measure is best for measuring the length of a hot dog?

A feet
B yards



5



PREVIEW

Please [Sign In](#) or [Sign Up](#) to download the printable version of this worksheet

6

C 15 feet
D 12 pounds




8

C 50 inch
D 50 pound




9 True or false?
A pencil weighs about 2 pounds.

A true
B false



10 Which unit of measure is best for measuring the length of a paper clip?

A foot
B inch
C yard
D pound

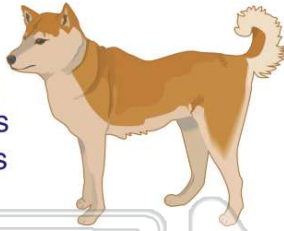




ANSWER KEY

How much could Denny's dog weigh?

- A 20 inches
- B 20 pounds
- C 20 ounces
- D 20 ton



(b)

My desk is about _____ tall.

- A 2 inches
- B 2 feet
- C 2 miles
- D 2 pounds



(b)

Ken bought a new basketball. How much might it weigh?

- A 1 inch
- B 1 pound
- C 1 ounce
- D 1 ton



(b)

Which unit of measure is best for measuring the length of a hot dog?

- A feet
- B yards
- C pounds



(d)



PREVIEW

Please [Sign In](#) or [Sign Up](#) to download the printable version of this worksheet

D 12 pounds



D 50 pound



True or false?

A pencil weighs about 2 pounds.

- A true
- B false



(b)

Which unit of measure is best for measuring the length of a paper clip?

- A foot
- B inch
- C yard
- D pound



(b)