



Name _____ Class _____ Date _____

1 Matthew has **6** kittens. **Two** of the kittens are girls. **How many are boys?**

- A 6
- B 2
- C 8
- D 4



2 There are **3** elephants and **4** giraffes at the zoo. **Which number sentence tells how many large animals are at the zoo in all?**

- A $3 - 4 =$
- B $4 - 3 =$
- C $4 + 3 =$
- D $4 \times 3 =$



3 Elizabeth took **20** pictures of the ocean, **5** pictures of the desert, and **6** pictures of the park. **How many pictures did she take in all?**

- A 31 pictures
- B 30 pictures



4 Sophia planted **225** tulip bulbs and **360** daffodil bulbs. **How many bulbs did she plant in all?**



5



PREVIEW


Please [Sign In](#) or [Sign Up](#) to download the printable version of this worksheet

7

- A \$20
- B \$108
- C \$90
- D \$118



- A 9
- B 8
- C 5
- D 13



9 Mitchell has **8** rabbits. If he puts **two** in each cage, how many cages will he use?

- A 2
- B 4
- C 6
- D 8



10 Sam bought **6** boxes of doughnuts to camp. If each box had **12** doughnuts, how many doughnuts does he have to share?

- A 64
- B 76
- C 72
- D 80





ANSWER KEY

Matthew has **6** kittens. **Two** of the kittens are girls. **How many are boys?**

- A 6
- B 2
- C 8
- D 4



(d)

There are **3** elephants and **4** giraffes at the zoo. **Which number sentence tells how many large animals are at the zoo in all?**

- A $3 - 4 =$
- B $4 - 3 =$
- C $4 + 3 =$
- D $4 \times 3 =$



(c)

Elizabeth took **20** pictures of the ocean, **5** pictures of the desert, and **6** pictures of the park. **How many pictures did she take in all?**

- A 31 pictures
- B 30 pictures
- C 29 pictures



(a)

Sophia planted **225** tulip bulbs and **360** daffodil bulbs. **How many bulbs did she plant in all?**



(c)




PREVIEW

Please [Sign In](#) or [Sign Up](#) to download the printable version of this worksheet

- B \$108
- C \$90
- D \$118




- B 8
- C 5
- D 13



Mitchell has **8** rabbits. If he puts **two** in each cage, how many cages will he use?

- A 2
- B 4
- C 6
- D 8



(b)

Sam bought **6** boxes of doughnuts to camp. If each box had **12** doughnuts, how many doughnuts does he have to share?

- A 64
- B 76
- C 72
- D 80



(c)