




Name _____ Class _____ Date _____

1 Louis went to the paper store and bought 980 yellow sheets of paper and 565 green sheets of paper. How many sheets of paper did he buy in all?

- A 1,555 sheets
- B 1,565 sheets
- C 1,545 sheets
- D 1,665 sheets



2

- A 4,567
- B 4,576
- C 4,666
- D 4,566



3 $\begin{array}{r} \$78.91 \\ + \$55.19 \\ \hline \end{array}$ addition


4 Max mows the lawn for Mrs. Peterson and gets paid \$45.00. Max also mows the lawn for Mrs. Jacobs and gets paid \$85.00. What is the total?



5 **PREVIEW**
Please [Sign In](#) or [Sign Up](#) to download the printable version of this worksheet

7 $\begin{array}{r} + 787 \\ \hline \end{array}$

- A 2,810
- B 2,709
- C 2,710
- D 3,719



8 came to the concert. Over both days, how many people came to the concert in all?

- A 6,569 people
- B 6,670 people
- C 6,570 people
- D 6,559 people



9 The clothing store made \$9,467 last week by selling many pairs of shoes. This week the store made \$7,034 by selling beautiful dresses. How much money did the store make in all?

- A \$16,601
- B \$16,591
- C \$16,511
- D \$16,501



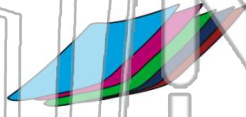
10 $\begin{array}{r} 8,200 \\ + 2,300 \\ \hline \end{array}$ addition
+ sum + add




Name _____ Class _____ Date _____

1 Louis went to the paper store and bought 980 yellow sheets of paper and 565 green sheets of paper. How many sheets of paper did he buy in all?

- A 1,555 sheets
- B 1,565 sheets
- C 1,545 sheets
- D 1,665 sheets



2  A 4,567
B 4,576
C 4,666
D 4,566

3
$$\begin{array}{r} \$78.91 \\ + \$55.19 \\ \hline \end{array}$$

addition

4 Max mows the lawn for Mrs. Peterson and gets paid \$45.00. Max also mows the lawn for Mrs. Jacobs and gets paid \$85.00. What is the total?

PREVIEW

Please [Sign In](#) or [Sign Up](#) to download the printable version of this worksheet



7
$$\begin{array}{r} + 787 \\ \hline \end{array}$$

- A 2,810
- B 2,709
- C 2,710
- D 3,719



8 came to the concert. Over both days, how many people came to the concert in all?

- A 6,569 people
- B 6,670 people
- C 6,570 people
- D 6,559 people



9 The clothing store made \$9,467 last week by selling many pairs of shoes. This week the store made \$7,034 by selling beautiful dresses. How much money did the store make in all?

- A \$16,601
- B \$16,591
- C \$16,511
- D \$16,501



10
$$\begin{array}{r} 8,200 \\ + 2,300 \\ \hline \end{array}$$

- A 6,500
- B 5,500
- C 5,600
- D 4,500

addition
+
sum
+
add