



Adding & Subtracting

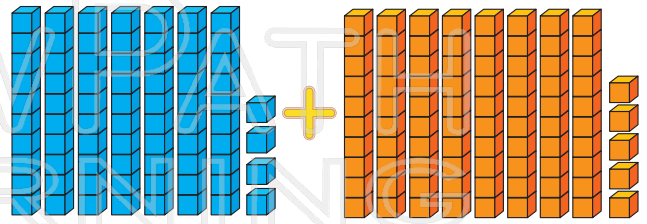
Math
D

Name _____ Class _____ Date _____

1 Fill in the answer.

	hundreds	tens	ones
+	4	4	9
	2	4	6

6 $74 + 85 =$ _____



2 Fill in the answer.

	thousands	hundreds	tens	ones

7 Fill in the answer.

	thousands	hundreds	tens	ones
	2	5		
	1	7		

3 What is t

260 -



PREVIEW

Please [Sign In](#) or [Sign Up](#) to download the printable version of this worksheet

038
847

4 Fill in the

	thousa	hundre	tens	ones
+	5	2	8	9
			7	6

9 Subtract 985 from 6,000.

5 Fill in the answer.

	hundreds	tens	ones
-	1	7	5
		8	4

10 Fill in the answer.

	thousands	hundreds	tens	ones
-	4	2	3	5
	1	9	1	7



Adding & Subtracting - Answer Key

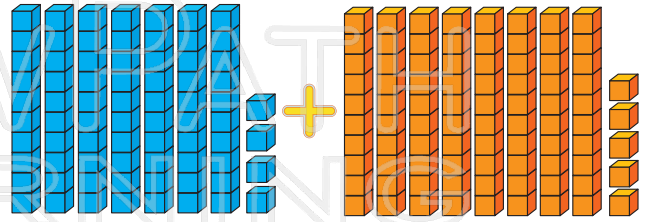
Math
D

Name _____ Class _____ Date _____

1 Fill in the answer.

	hundreds	tens	ones
	4	4	9
+	2	4	6
	6	9	5

6 $74 + 85 = 159$



2 Fill in the answer.

	thousands	hundreds	tens	ones

7 Fill in the answer.

	thousands	hundreds	tens	ones
	2	5		
	1	7		
	0	8		


3 What is the answer?

$260 -$



PREVIEW

Please [Sign In](#) or [Sign Up](#) to download the printable version of this worksheet



4 Fill in the

	thousa	hundre	tens	ones
	5	2	8	9
+			7	6
	5	3	6	5

9 Subtract 985 from 6,000.

$$\begin{array}{r} 6,000 \\ - 985 \\ \hline 5,015 \end{array}$$

5 Fill in the answer.

	hundreds	tens	ones
	1	7	5
-		8	4
		9	1

10 Fill in the answer.

	thousands	hundreds	tens	ones
	4	2	3	5
-	1	9	1	7
	2	3	1	8