



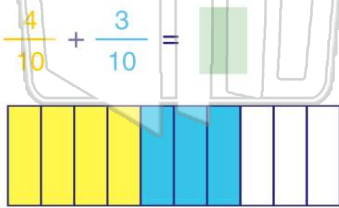
Name _____ Class _____ Date _____

1

$$\frac{2}{9} + \frac{3}{9} = \square$$

- A $\frac{5}{18}$ B $\frac{6}{18}$ C $\frac{5}{9}$ D $\frac{1}{9}$

3



5



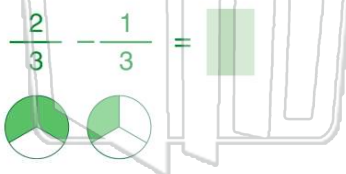
PREVIEW

Please [Sign In](#) or [Sign Up](#) to download the printable version of this worksheet

7

- A $\frac{3}{14}$ B $\frac{1}{7}$ C $\frac{2}{14}$ D $\frac{3}{7}$

9



- A $\frac{2}{3}$ B $\frac{1}{6}$ C $\frac{1}{3}$ D $\frac{3}{3}$

2

$$\frac{5}{6} + \frac{4}{6} = \frac{9}{12}$$

- A true
B false

True or false?



4

Lisa used $\frac{1}{8}$ yd of green ribbon and $\frac{4}{8}$ yd of pink ribbon to make a belt for herself. How much ribbon did Lisa use all together?

- A 5 B 3 C 5 D 3

10

- A $\frac{2}{8}$ B $\frac{1}{4}$ C $\frac{2}{4}$ D $\frac{3}{4}$

True or false?

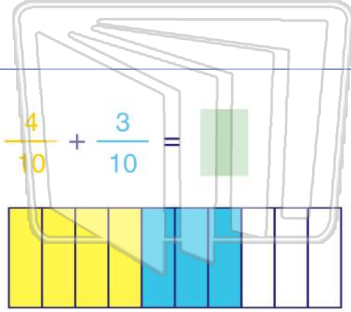
- A true B false



ANSWER KEY

$$\frac{2}{9} + \frac{3}{9} = \square$$

- A** $\frac{5}{18}$ **B** $\frac{6}{18}$ **C** $\frac{5}{9}$ **D** $\frac{1}{9}$



- A** 7 **B** 12 **C** 1 **D** 7

$$\frac{5}{6} + \frac{4}{6} = \frac{9}{12}$$

- A** true
B false

True or false?



Lisa used $\frac{1}{8}$ yd of green ribbon and $\frac{4}{8}$ yd of pink ribbon to make a belt for herself. How much ribbon did Lisa use all together?

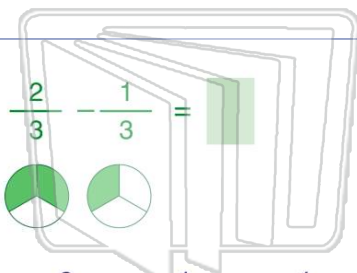
- A** $\frac{5}{16}$ **B** $\frac{3}{8}$ **C** $\frac{5}{8}$ **D** $\frac{3}{16}$



PREVIEW

Please [Sign In](#) or [Sign Up](#) to download the printable version of this worksheet

- A** $\frac{3}{14}$ **B** $\frac{1}{7}$ **C** $\frac{2}{14}$ **D** $\frac{3}{7}$



- A** $\frac{2}{3}$ **B** $\frac{1}{6}$ **C** $\frac{1}{3}$ **D** $\frac{3}{3}$

- A** $\frac{2}{8}$ **B** $\frac{1}{4}$ **C** $\frac{2}{4}$ **D** $\frac{3}{4}$



True or false?

- A** true **B** false