

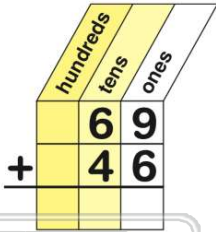


Name _____ Class _____ Date _____

1

$$\begin{array}{r} 69 \\ + 46 \\ \hline \end{array}$$

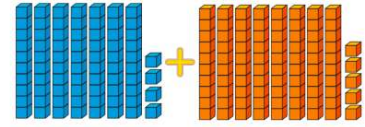
- A 105
- B 115
- C 100
- D 112



2

$$\begin{array}{r} 74 \\ + 85 \\ \hline \end{array}$$

- A 159
- B 150
- C 161
- D 149

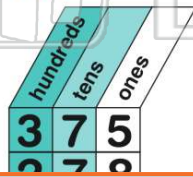


3

$$375 + 278 = 543$$

True or false?


- A true
- B false



4

Find the **sum** of 467 and 548.

- A 905
- B 1,005
- C 1,015
- D 915



5




PREVIEW

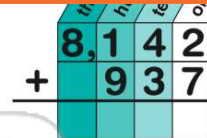
Please [Sign In](#) or [Sign Up](#) to download the printable version of this worksheet

7

True or false?



- C 9,179
- D 8,179



9

$$724 + 165 = \square$$

- A 878
- B 988
- C 889
- D 879

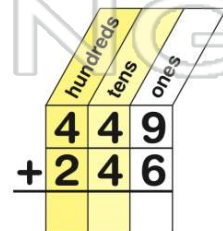


10

$$449 + 246 = 695$$

True or false?

- A true
- B false

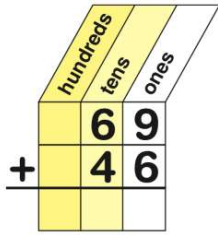




ANSWER KEY

$$\begin{array}{r} 69 \\ + 46 \\ \hline \end{array}$$

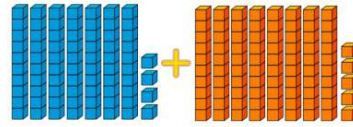
- A 105
- B 115
- C 100
- D 112



(b)

$$\begin{array}{r} 74 \\ + 85 \\ \hline \end{array}$$

- A 159
- B 150
- C 161
- D 149

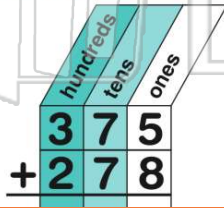


(a)

$$375 + 278 = 543$$

True or false?

- A true
- B false



(b)

Find the **sum** of 467 and 548.

- A 905
- B 1,005
- C 1,015
- D 915



(c)



PREVIEW

Please [Sign In](#) or [Sign Up](#) to download the printable version of this worksheet

$$724 + 165 = \square$$

- A 878
- B 988
- C 889
- D 879

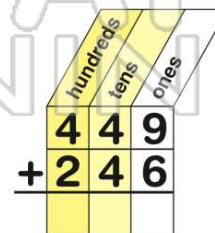


(c)

$$449 + 246 = 695$$

True or false?

- A true
- B false



(a)