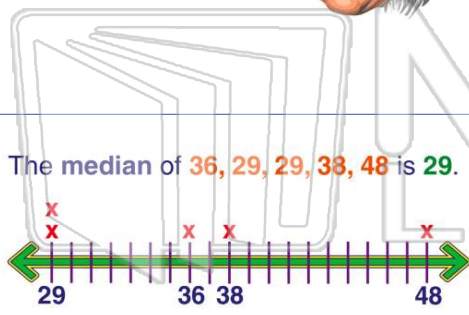
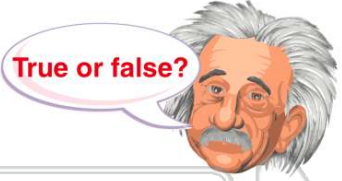


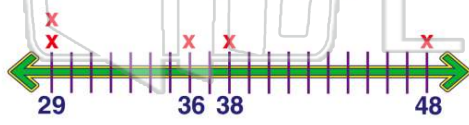


Name _____ Class _____ Date _____

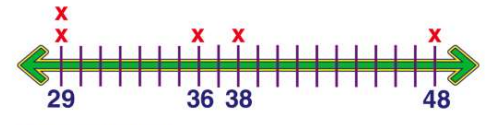
1 The mean of 36, 29, 29, 38, 48 is 36.
 A true
 B false



3 The median of 36, 29, 29, 38, 48 is 29.
 True or false?



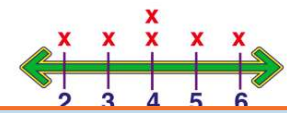
2 The mode of 36, 29, 29, 38, 48 is 38.



True or false?
 A true
 B false

4 Find the mean for the following set of numbers: 2 3 4 4 5 6

- A 3
- B 28
- C 24
- D 4

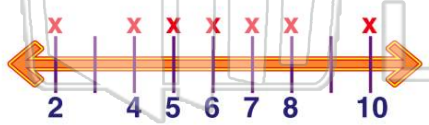


PREVIEW

Please [Sign In](#) or [Sign Up](#) to download the printable version of this worksheet

7 True or false?
 A true
 B false

9 The median of 4, 6, 2, 8, 7, 5, 10 is 6.



True or false?
 A true
 B false

10 Find the mean for the following set of numbers:



- A 90
- B 19
- C 18
- D 95

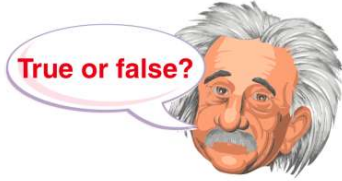


ANSWER KEY

The **mean** of 36, 29, 29, 38, 48 is 36.

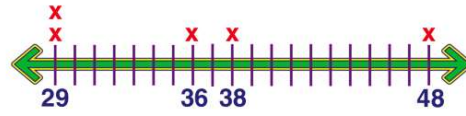
- A true
- B false

True or false?



(a)

The **mode** of 36, 29, 29, 38, 48 is 38.

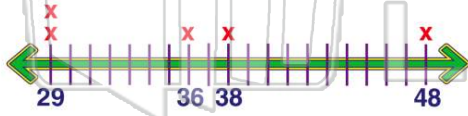


(b)

True or false?

- A true
- B false

The **median** of 36, 29, 29, 38, 48 is 29.



(b)

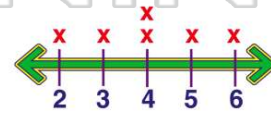
True or false?

- A true

Find the **mean** for the following set of numbers:

234456

- A 3
- B 28
- C 24
- D 4



(d)

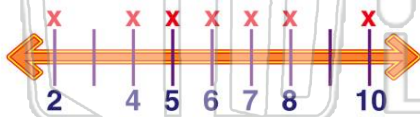


PREVIEW

Please [Sign In](#) or [Sign Up](#) to download the printable version of this worksheet



The **median** of 4, 6, 2, 8, 7, 5, 10 is 6.



(a)

True or false?

- A true
- B false

True or false?

- A true
- B false

Find the **mean** for the following set of numbers:

13 18 21 18 20

(c)

- A 90
- B 19
- C 18
- D 95