



Name _____ Class _____ Date _____


1 How is **6.2** best written?

- A sixty two
- B six and two ones
- C six and two tenths
- D six and two tens




3 **1.78** is _____.

- A one and seventy-eight
- B one and seventy-eight tenths




2 **3.2** is three and two tens.



True or false?

- A true
- B false

4 **5.92** is five and ninety-two hundredths.



5

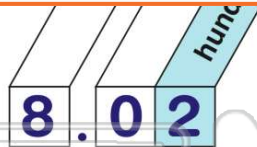


PREVIEW

Please [Sign In](#) or [Sign Up](#) to download the printable version of this worksheet

7

- A true
- B false

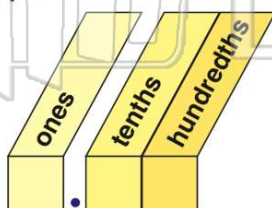


- B tenths
- C hundredths
- D tens



9 Which underlined digit is in the **hundredths** place?

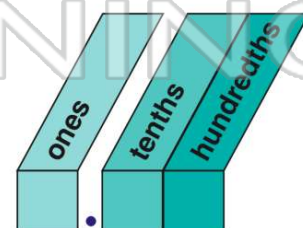
- A 3.572
- B 3.572
- C 3.572
- D 3.572



10 What digit is in the **tenths** place?

12.65

- A 1
- B 2
- C 6
- D 5

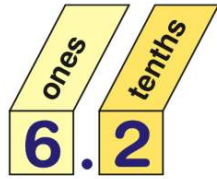




ANSWER KEY

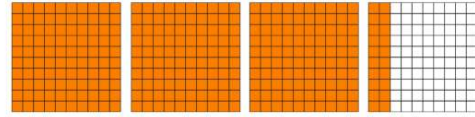
How is **6.2** best written?

- A sixty two
- B six and two ones
- C six and two tenths
- D six and two tens



(c)

3.2 is three and two tens.

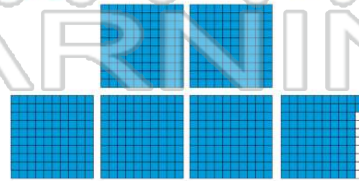


(b)

True or false?

- A true
- B false

5.92 is five and ninety-two hundredths.




(a)

A true

1.78 is _____.

- A one and seventy-eight
- B one and seventy-eight tenths
- C one hundred and seventy-eight
- D one and seventy-eight hundredths



(d)



PREVIEW

Please [Sign In](#) or [Sign Up](#) to download the printable version of this worksheet

B raise

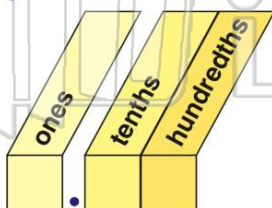


- C hundredths
- D tens



Which **underlined** digit is in the **hundredths** place?

- A 3.572
- B 3.572
- C 3.572
- D 3.572

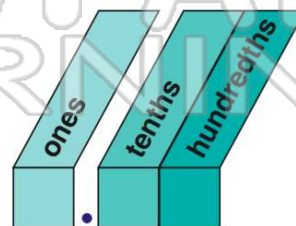


(d)

What **digit** is in the **tenths** place?

12.65

- A 1
- B 2
- C 6
- D 5



(c)