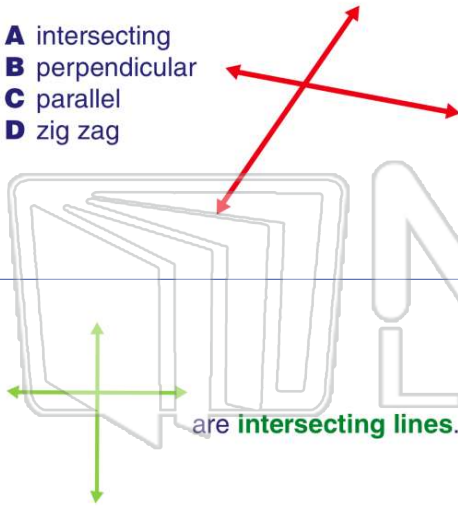




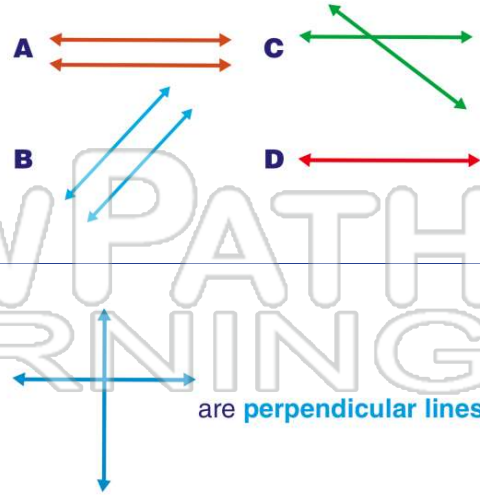
Name _____ Class _____ Date _____

1 These lines are _____.

- A intersecting
- B perpendicular
- C parallel
- D zig zag



2 Which set of lines is **intersecting**?



3 _____
are **intersecting lines**.

4 _____
are **perpendicular lines**.



PREVIEW

Please [Sign In](#) or [Sign Up](#) to download the printable version of this worksheet

7 _____

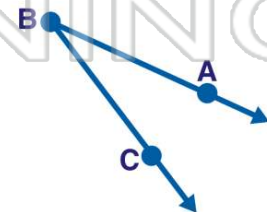
- C perpendicular
- D parallel

9 _____
are **parallel lines**.

- A true
- B false

10 Name the **angle**.

- A $\angle CAB$
- B $\angle ACB$
- C $\angle ABC$
- D $\angle BCA$

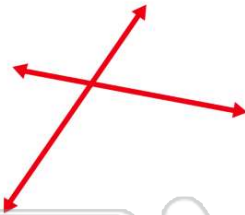




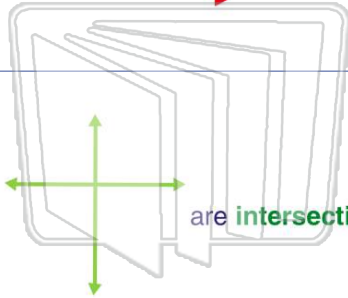
ANSWER KEY

These lines are _____.

- A** intersecting
- B** perpendicular
- C** parallel
- D** zig zag



(a)

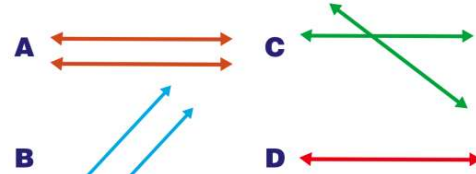


are **intersecting lines**.

(a)

- A** true
- B** false

Which set of lines is **intersecting**?



(c)



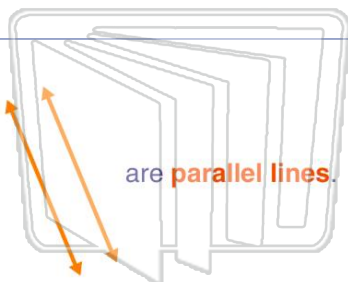
are **perpendicular lines**.

(a)

- A** true
- B** false

PREVIEW

Please [Sign In](#) or [Sign Up](#) to download the printable version of this worksheet



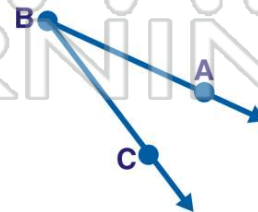
are **parallel lines**.

(a)

- A** true
- B** false

Name the **angle**.

- A** $\angle CAB$
- B** $\angle ACB$
- C** $\angle ABC$
- D** $\angle BCA$



(c)