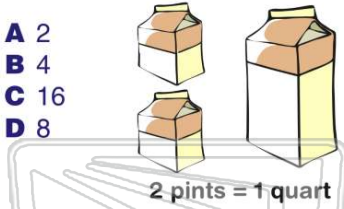




Name _____ Class _____ Date _____

1 If there are **2 pints** in **1 quart**. How many **pints** are there in **8 quarts**?

- A 2
- B 4
- C 16
- D 8



3 An **acorn** is about 1 _____ **wide**.

- A mm
- B cm
- C m
- D km



2 Which measurement is **most likely** the **length** of an **eraser**?

- A 2 inches
- B 2 feet
- C 2 yards
- D 2 miles



4 If a rabbit weighs **5 kilograms**, how many **grams** is it equal to?

1 kg = 1,000 g

- A 5 g
- B 50 g



PREVIEW

Please [Sign In](#) or [Sign Up](#) to download the printable version of this worksheet

7

- B 16 fl oz
- C 40 fl oz
- D 80 fl oz

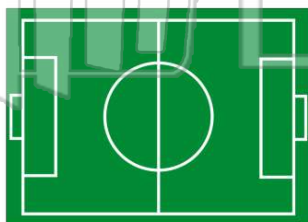


1 cup = 8 fl oz

- B m
- C mm
- D km

9 The **length** of a **soccer field** is about 100 _____.

- A mm
- B cm
- C km
- D m



10 A **baseball bat** is about 3 _____ **long**.

- A inches
- B miles
- C feet
- D yards

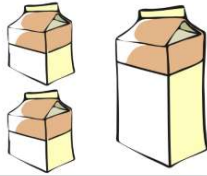




ANSWER KEY

If there are **2 pints** in **1 quart**. How many **pints** are there in **8 quarts**?

- A 2
- B 4
- C 16
- D 8



2 pints = 1 quart

(C)

Which measurement is **most likely** the **length of an eraser**?


- A 2 inches
- B 2 feet
- C 2 yards
- D 2 miles



(a)

An **acorn** is about 1 _____ **wide**.

- A mm
- B cm
- C m
- D km



(b)

If a rabbit weighs **5 kilograms**, how many **grams** is it equal to?

1 kg = 1,000 g

- A 5 g
- B 50 g
- C 500 g



(d)



PREVIEW

Please [Sign In](#) or [Sign Up](#) to download the printable version of this worksheet

- C 40 fl oz
- D 80 fl oz

1 cup = 8 fl oz

The **length** of a soccer field is about 100 _____.

- A mm
- B cm
- C km
- D m



(d)

- C mm
- D km

A **baseball bat** is about 3 _____ long.

- A inches
- B miles
- C feet
- D yards



(c)