



Name _____ Class _____ Date _____


1 There are **2 cups in 1 pint**. Molly needs to make **20 cups** of lemonade. How many **pints** is that?

- A 20 pints
- B 10 pints
- C 5 pints
- D 2 pints



2 The **length** of a school bus is about 35 _____.

- A inches
- B miles
- C feet
- D yards



3 If there are **3 feet in 1 yard**, how many **feet** are there in **3 yards**?

- A 1 foot
- B 3 feet
- C 6 feet
- D 9 feet



4 A **bath** is about 1 _____ wide.

- A yard
- B foot
- C mile
- D inch



PREVIEW

Please [Sign In](#) or [Sign Up](#) to download the printable version of this worksheet

7 A **pencil** is about 6 _____ long.

- A millimeters
- B centimeters
- C meters
- D kilometers



10 A **paperclip** is about 1 _____ long.

- C miles
- D inches

- A inch
- B foot
- C mile
- D yard





ANSWER KEY

There are **2 cups in 1 pint**. Molly needs to make **20 cups** of lemonade. How many **pints** is that?


- A** 20 pints
- B** 10 pints
- C** 5 pints
- D** 2 pints



(b)

The **length** of a school bus is about 35 _____.

- A** inches
- B** miles
- C** feet
- D** yards



(c)

If there are **3 feet in 1 yard**, how many **feet** are there in **3 yards**?

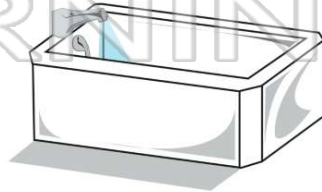
- A** 1 foot
- B** 3 feet
- C** 6 feet
- D** 9 feet



(d)

A bathtub is about 1 _____ wide.

- A** yard
- B** foot
- C** mile
- D** inch



(a)



PREVIEW

Please [Sign In](#) or [Sign Up](#) to download the printable version of this worksheet

- B** centimeters
- C** meters
- D** kilometers



- D** inches



A pencil is about 6 _____ long.

- A** yards
- B** feet
- C** inches
- D** miles



(c)

A paperclip is about 1 _____ long.

- A** inch
- B** foot
- C** mile
- D** yard



(a)