



Name _____ Class _____ Date _____

1 Karen's mom bought 3 gallons of milk. How many quarts of milk is that equal to?

1 gallon = 4 quarts

- A 1
- B 3
- C 6
- D 12



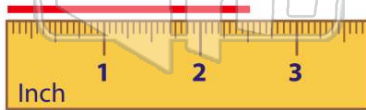
2 A kitten weighs 64 ounces. How many pounds does the kitten weigh?

1 pound = 16 ounces

- A 1 pound
- B 2 pounds
- C 3 pounds
- D 4 pounds

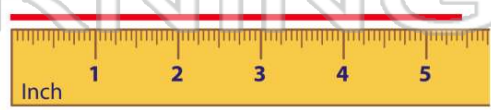


3 Measure the line to the $\frac{1}{2}$ inch.



- A 1 inch
- C 2 inches

4 Measure the line to the $\frac{1}{2}$ inch.

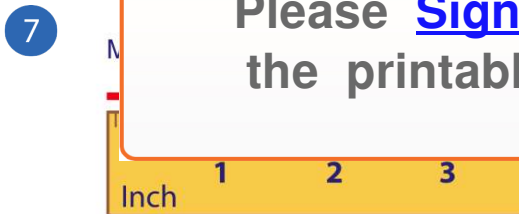


- A $5\frac{1}{2}$ inch
- C $6\frac{1}{2}$ inches

5

PREVIEW

Please [Sign In](#) or [Sign Up](#) to download the printable version of this worksheet

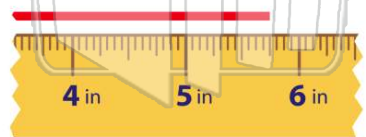


- A 1 in.
- B $\frac{1}{4}$ in.
- C $\frac{1}{2}$ in.
- D $\frac{3}{4}$ in.



- A 2 in.
- B 1 in.
- C $1\frac{1}{2}$ in.
- D $1\frac{1}{4}$ in.

9 Measure the line to the $\frac{1}{4}$ inch.



- A $5\frac{3}{4}$ in.
- B $5\frac{1}{2}$ in.
- C $5\frac{1}{4}$ in.
- D 5 in.

10 Measure the line to the $\frac{1}{4}$ inch.



- A $2\frac{1}{4}$ in.
- B $2\frac{1}{2}$ in.
- C $2\frac{3}{4}$ in.
- D 3 in.



ANSWER KEY

Karen's mom bought 3 gallons of milk.
How many quarts of milk is that equal to?

1 gallon = 4 quarts

- A 1
- B 3
- C 6
- D 12



(d)

A kitten weighs 64 ounces. How many pounds does the kitten weigh?

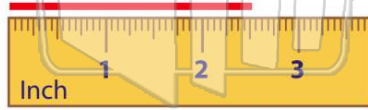
1 pound = 16 ounces

- A 1 pound
- B 2 pounds
- C 3 pounds
- D 4 pounds



(d)

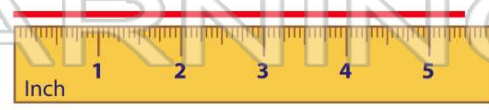
Measure the line to the $\frac{1}{2}$ inch.



(d)

- A 1 inch
- B 1.5 inches
- C 2 inches
- D 3 inches

Measure the line to the $\frac{1}{2}$ inch.



(a)

- A $5\frac{1}{2}$ inch
- B 6 inches
- C $6\frac{1}{2}$ inches
- D 7 inches

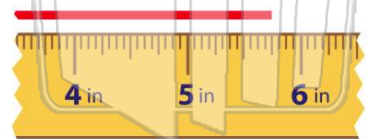


PREVIEW

Please [Sign In](#) or [Sign Up](#) to download the printable version of this worksheet

- A 1 in.
- B $\frac{1}{4}$ in.
- C $\frac{1}{2}$ in.
- D $\frac{3}{4}$ in.

Measure the line to the $\frac{1}{4}$ inch.



(a)

- A $5\frac{3}{4}$ in.
- B $5\frac{1}{2}$ in.
- C $5\frac{1}{4}$ in.
- D 5 in.

- A 2 in.
- B 1 in.
- C $1\frac{1}{2}$ in.
- D $1\frac{1}{4}$ in.

Measure the line to the $\frac{1}{4}$ inch.



(b)

- A $2\frac{1}{4}$ in.
- B $2\frac{1}{2}$ in.
- C $2\frac{3}{4}$ in.
- D 3 in.