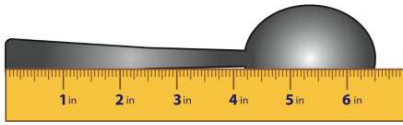




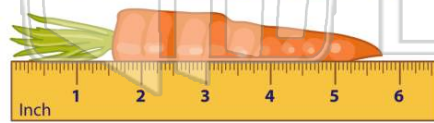
Name _____ Class _____ Date _____

1 What is the **length** of the **spoon**?



- A 6 inches
- B $6\frac{1}{2}$ inches
- C $6\frac{3}{4}$ inches
- D $6\frac{1}{2}$ feet

3 The carrot is _____ inches long.

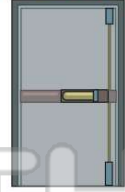


- A $5\frac{3}{4}$
- C $5\frac{1}{2}$

2 The height of the door is **2 meters**. How many **centimeters** tall is the door?

1 meter = 100 centimeters


EXIT



- A 25 cm
- B 50 cm
- C 100 cm
- D 200 cm

4 The picture frame is **30 centimeters** long. How many **decimeters** long is it?

1 dm = 10 cm



- A 1 dm
- B 2 dm
- C 3 dm



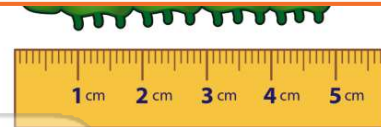
PREVIEW

7 Please [Sign In](#) or [Sign Up](#) to download the printable version of this worksheet

- A 0.2 km
- B 2 km
- C 20 km
- D 200 km



- C 6
- D 7



9 David's pen holds _____ of ink.

- A 2 mL
- B 20 mL
- C 2 L
- D 20 L



10 The stem of a flower is **20 centimeters** in length. How long is the stem in **millimeters**?

1 cm = 10 mm

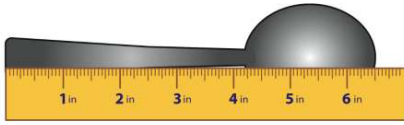
- A 2 mm
- B 20 mm
- C 200 mm
- D 2,000 mm





ANSWER KEY

What is the **length** of the **spoon**?



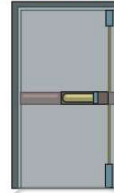
- A** 6 inches
- B** $6\frac{1}{2}$ inches
- C** $6\frac{3}{4}$ inches
- D** $6\frac{1}{2}$ feet

(b)

The height of the door is **2 meters**.
How many **centimeters** tall is the door?

1 meter = 100 centimeters

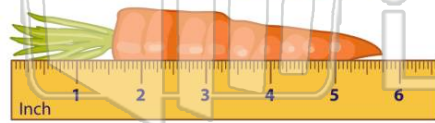
EXIT



- A** 25 cm
- B** 50 cm
- C** 100 cm
- D** 200 cm

(d)

The carrot is _____ inches long.



- A** $5\frac{3}{4}$
- B** 5
- C** $5\frac{1}{2}$
- D** 1

(a)

The picture frame is **30 centimeters** long. How many **decimeters** long is it?

1 dm = 10 cm



- A** 1 dm
- B** 2 dm
- C** 3 dm
- D** 4 dm

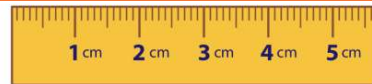
(c)



PREVIEW

Please [Sign In](#) or [Sign Up](#) to download the printable version of this worksheet

- A** 0.2 km
- B** 2 km
- C** 20 km
- D** 200 km



David's pen holds _____ of ink.

- A** 2 mL
- B** 20 mL
- C** 2 L
- D** 20 L



(a)

The stem of a flower is **20 centimeters** in length. How long is the stem in **millimeters**?

1 cm = 10 mm

- A** 2 mm
- B** 20 mm
- C** 200 mm
- D** 2,000 mm



(c)