




Name _____ Class _____ Date _____

1

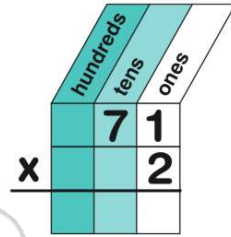
- A 71
- B 184
- C 204
- D 222



2

71 x 2 =

- A 92
- B 112
- C 142
- D 172



3

The product of 18 x 7 is 76.

- A true
- B false



4

51 x 6

- A 116
- B 56
- C 232



5

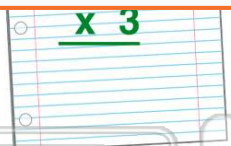


PREVIEW

Please [Sign In](#) or [Sign Up](#) to download the printable version of this worksheet

7

- B 73
- C 142
- D 213



- B 205
- C 102
- D 212



9

29 x 3 =

- A 52
- B 87
- C 62
- D 67



10

Rebecca has 36 pairs of shoes in her closet. How many shoes does Rebecca have?

- A 36
- B 52
- C 72
- D 96






ANSWER KEY

68×3

A 71
B 184
C 204
D 222



(c)

$71 \times 2 =$

| | | | |
|---|----------|------|------|
| | hundreds | tens | ones |
| | | 7 | 1 |
| x | | | 2 |
| | | | |


A 92
B 112
C 142
D 172

(c)

The product of 18×7 is 76.

A true
B false

True or false?



(b)

51×6

A 116
B 56
C 232
D 306



(d)



PREVIEW

Please [Sign In](#) or [Sign Up](#) to download the printable version of this worksheet

C 142
D 213



C 102
D 212



$29 \times 3 =$

A 52
B 87
C 62
D 67



(b)

Rebecca has 36 pairs of shoes in her closet. How many shoes does Rebecca have?

A 36
B 52
C 72
D 96



(c)