




Name \_\_\_\_\_ Class \_\_\_\_\_ Date \_\_\_\_\_

1


$$\begin{array}{r} 12 \\ \times 10 \\ \hline \end{array}$$



A 120  
B 102  
C 210  
D 140

2


$$\begin{array}{r} 77 \\ \times 9 \\ \hline \end{array}$$



A 704  
B 696  
C 693  
D 793

3

The pizza shop charges 75 cents for one slice of pizza. John bought two slices for his lunch today. **How much** did John spend on pizza?




A \$1.00  
B \$1.50

4

Frank was glad that 22 people came to his birthday party. Everyone brought 2 gifts. **How many** gifts did Frank receive?

$$\begin{array}{r} 22 \\ \times 2 \\ \hline \end{array}$$



A 22      C 40

5



## PREVIEW

Please [Sign In](#) or [Sign Up](#) to download the printable version of this worksheet

7

$$\begin{array}{r} \phantom{00} \\ \times 2 \\ \hline \end{array}$$



B 64  
C 82  
D 84

10

$$\begin{array}{r} 27 \\ \times 13 \\ \hline \end{array}$$




A 361  
B 351  
C 401  
D 311

9

Nina has to buy 2 books for school. Each book costs \$34. **How much** money will Nina spend on buying books?


$$\begin{array}{r} \$34 \\ \times 2 \\ \hline \end{array}$$



A \$68.00  
B \$72.00  
C \$58.00  
D \$64.00

10

Timmy went to the candy store today to buy his favorite lollipops which cost 24 cents each. He bought 30 lollipops to share with his friends. **How much** money did Timmy spend on lollipops?




A \$70.20      C \$7.20  
B \$0.72      D \$7.02



## ANSWER KEY


$$\begin{array}{r} 12 \\ \times 10 \\ \hline \end{array}$$



**A** 120  
**B** 102  
**C** 210  
**D** 140

(a)

$$\begin{array}{r} 77 \\ \times 9 \\ \hline \end{array}$$



**A** 704  
**B** 696  
**C** 693  
**D** 793

(c)

The pizza shop charges 75 cents for one slice of pizza. John bought two slices for his lunch today. How much did John spend on pizza?

- A** \$1.00  
**B** \$1.50  
**C** \$1.25



(b)

Frank was glad that 22 people came to his birthday party. Everyone brought 2 gifts. How many gifts did Frank receive?

- A** 22  
**B** 42  
**C** 40  
**D** 44

$$\begin{array}{r} 22 \\ \times 2 \\ \hline \end{array}$$



(d)



## PREVIEW

Please [Sign In](#) or [Sign Up](#) to download the printable version of this worksheet

- C** 82  
**D** 84



- A** 301  
**B** 351  
**C** 401  
**D** 311

$$\begin{array}{r} \phantom{00} \\ \times 13 \\ \hline \end{array}$$



Nina has to buy 2 books for school. Each book costs \$34. How much money will Nina spend on buying books?

- A** \$68.00  
**B** \$72.00  
**C** \$58.00  
**D** \$64.00

$$\begin{array}{r} \$34 \\ \times 2 \\ \hline \end{array}$$



(a)

Timmy went to the candy store today to buy his favorite lollipops which cost 24 cents each. He bought 30 lollipops to share with his friends. How much money did Timmy spend on lollipops?

- A** \$70.20  
**B** \$0.72  
**C** \$7.20  
**D** \$7.02



(c)