




Name _____ Class _____ Date _____

1 Choose the **next** shape in the pattern.



- A circle
- B star
- C triangle
- D square



3 Find the **next** number in the pattern.



2 Find the **missing** number.



- A 23
- B 20
- C 24
- D 26

4 What is the **missing** number?

Number of people:	2	3	4	5	6
Number of hands:	4	6	8	10	?

- A 10
- B 14



5



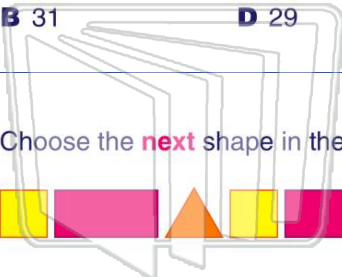
PREVIEW

Please [Sign In](#) or [Sign Up](#) to download the printable version of this worksheet

7



- A 32
- B 31
- C 30
- D 29



9 Choose the **next** shape in the pattern.



- A triangle
- B square
- C rectangle
- D circle

10 Find the **missing** number.




- A 33
- B 17
- C 18
- D 19





ANSWER KEY

Choose the **next** shape in the pattern.



- A circle
- B star
- C triangle
- D square

(d)

Find the **missing** number.

6, 12, 18, ?, 30

- A 23
- B 20
- C 24
- D 26



(c)

Find the **next** number in the pattern.



- A 38
- C 37

(d)

What is the **missing** number?

Number of people:	2	3	4	5	6
Number of hands:	4	6	8	10	?

- A 10
- B 14
- C 12



(c)



PREVIEW

Please [Sign In](#) or [Sign Up](#) to download the printable version of this worksheet

- A 32
- B 31
- C 30
- D 29

- B 48
- C 46
- D 42



Choose the **next** shape in the pattern.



- A triangle
- B square
- C rectangle
- D circle

(a)

Find the **missing** number.



- A 33
- B 17
- C 18
- D 19

(d)