





Name _____ Class _____ Date _____

1 There were 100 questions on your Geography test. You answered 95 of them correctly. What score did you receive on your test? $\frac{95}{100} = \square$




A 85% C 5%
B 95% D 15%

2 $\frac{25}{100} = \square$




A 75%
B 35%
C 25%
D 15%

3 What percentage of the square is shaded?



A 30%
B 75%
C 25%
D 50%


4 There were 100 questions on your Science Test. You only answered 13 of them incorrectly. What score did you receive on your test?




PREVIEW

Please [Sign In](#) or [Sign Up](#) to download the printable version of this worksheet

$\frac{82}{100} = \square$




A 81% C 28%
B 18% D 82%

A 100%
B 13%
C 47%
D 74%




9 $\frac{17}{100} = \square$



A 17%
B 83%
C 38%
D 71%

10 There were 100 questions on your Language Arts Test. You answered 5 of them incorrectly. What score did you receive on your test?



A 95% C 5%
B 59% D 85%



ANSWER KEY

There were 100 questions on your Geography test. You answered 95 of them correctly. What score did you receive on your test?

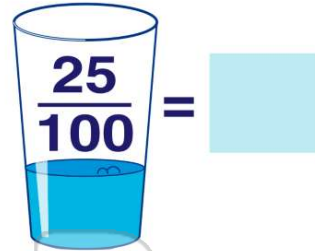
$$\frac{95}{100} = \square$$

- A** 85% **C** 5%
B 95% **D** 15%



(b)


- A** 75%
B 35%
C 25%
D 15%



(c)

What percentage of the square is shaded?

- A** 30%
B 75%
C 25%
D 50%




$$\frac{1}{2} = \frac{50}{100}$$

(d)

There were 100 questions on your Science Test. You only answered 13 of them incorrectly. What score did you receive on your test?

- A** 13% **C** 87% **100%**



(c)



PREVIEW

Please [Sign In](#) or [Sign Up](#) to download the printable version of this worksheet

- $\frac{17}{100} = \square$
- A** 81% **C** 28%
B 18% **D** 82%




- B** 13%
C 47%
D 74%



$$\frac{17}{100} = \square$$

- A** 17%
B 83%
C 38%
D 71%



(a)

There were 100 questions on your Language Arts Test. You answered 5 of them incorrectly. What score did you receive on your test?

- A** 95% **C** 5%
B 59% **D** 85%



(a)