



Name _____ Class _____ Date _____


1 If **100 people** entered the store but only **15 people** bought something, what percentage of the shoppers bought something in the store?

A 75% $\frac{15}{100} = \square$
 B 85%
 C 15%
 D 5%




2 If **100 people** came to the party and **55 stayed until midnight**, what percentage of the party guests went home before midnight?

A 15% C 45% $\frac{100}{100} - 55\%$
 B 55% D 54%




3 There were **100 questions** on your Multiplication test. You answered **91 of them correctly**. What score did you receive on your test? $\frac{91}{100} = \square$



4 $\frac{86}{100} = \square$

A 18%
 B 16%
 C 68%

"Fractions are fun!"



5




PREVIEW

Please [Sign In](#) or [Sign Up](#) to download the printable version of this worksheet

6 People enjoyed the roller coaster ride? $\frac{80}{100} = \square$

A 80% C 65%
 B 20% D 85%



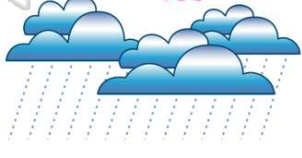
7 $\frac{41}{100} = \square$

A 17%
 B 41%
 C 49%
 D 100%




9 There were **100 questions** on your Weather Facts Test. You answered **79 of them correctly**. What score did you receive on your test? $\frac{79}{100} = \square$

A 21%
 B 69%
 C 59%
 D 79%



10 $\frac{77}{100} = \square$

A 66%
 B 77%
 C 33%
 D 177%





ANSWER KEY

If 100 people entered the store but only 15 people bought something, what percentage of the shoppers bought something in the store?

- A 75%
- B 85%
- C 15%
- D 5%

$$\frac{15}{100} = \square$$



(C)

If 100 people came to the party and 55 stayed until midnight, what percentage of the party guests went home before midnight?

- A 15%
- B 55%
- C 45%
- D 54%

$$\frac{100\%}{-55\%}$$



(C)

There were 100 questions on your Multiplication test. You answered 91 of them correctly. What score did you receive on your test?

- A 85%
- B 91%
- C 9%
- D 91%

$$\frac{91}{100} = \square$$



(d)

$$\frac{86}{100} = \square$$

- A 18%
- B 16%
- C 68%
- D 86%

"Fractions are fun!"



(d)



PREVIEW

Please [Sign In](#) or [Sign Up](#) to download the printable version of this worksheet

- A 80%
- B 20%
- C 65%
- D 85%

$$\frac{20}{100} = \square$$



- A 77%
- B 41%
- C 49%
- D 100%

$$\frac{100}{100} = \square$$



There were 100 questions on your Weather Facts Test. You answered 79 of them correctly. What score did you receive on your test?

- A 21%
- B 69%
- C 59%
- D 79%

$$\frac{79}{100} = \square$$



(d)

$$\frac{77}{100} = \square$$

- A 66%
- B 77%
- C 33%
- D 177%



(b)