



Rounding Numbers

Math
D

Name _____ Class _____ Date _____

1 Round **23** to the nearest **tens**.



- A 23
- B 30
- C 20
- D 25

2 **67** rounded to the nearest **tens** is 60.



True or false?

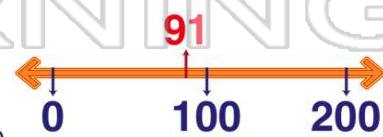
- A true
- B false

3 Round **177** to the nearest **tens**.



- A 170
- B 177
- C 200

4 Round **91** to the nearest **hundreds**.



- A 90
- B 100

5



PREVIEW

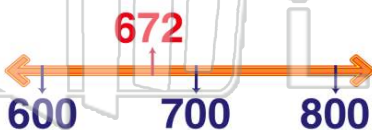
Please [Sign In](#) or [Sign Up](#) to download the printable version of this worksheet

7

- A 200
- B 140
- C 100
- D 104


- A 140
- B 144
- C 100
- D 150

9 Round **672** to the nearest **hundreds**.



- A 600
- B 670
- C 650
- D 700

10 **703** rounded to the nearest **hundreds** is **800**.



True or false?

- A true
- B false



ANSWER KEY


Round **23** to the nearest **tens**.



(c)

- A 23
- B 30
- C 20
- D 25

67 rounded to the nearest **tens** is 60.



(b)

True or false?

- A true
- B false

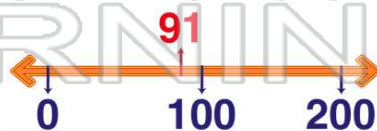
Round **177** to the nearest **tens**.



(d)

- A 170
- B 177
- C 200
- D 180

Round **91** to the nearest **hundreds**.



(b)

- A 90
- B 100
- C 191



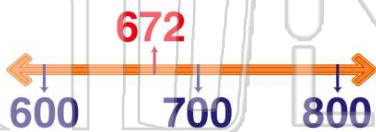
PREVIEW

Please [Sign In](#) or [Sign Up](#) to download the printable version of this worksheet

- B 140
- C 100
- D 104

- B 144
- C 100
- D 150

Round **672** to the nearest **hundreds**.



(d)

- A 600
- B 670
- C 650
- D 700

703 rounded to the nearest **hundreds** is **800**.



(b)

True or false?

- A true
- B false