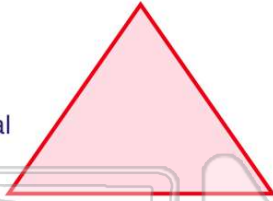




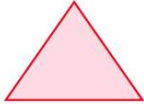


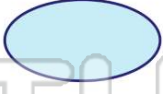
Name _____ Class _____ Date _____

1 What is the **name** of this **polygon**?

- A square
- B pentagon
- C triangle
- D quadrilateral

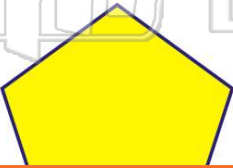


2 Which picture is a **triangle**?

- A 
- B 
- C 
- D 

3 What is a **five-sided figure** called?

- A triangle
- B square
- C hexagon
- D pentagon



4 What is **name** of the following type of **quadrilateral**?

- A square
- B rhombus
- C rectangle
- D trapezoid



PREVIEW

7 Please [Sign In](#) or [Sign Up](#) to download the printable version of this worksheet


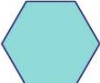


- C quadrilateral
- D hexagon



- C octagon
- D triangle



9 Which one of the following is a **quadrilateral**?

- A 
- B 
- C 
- D 

10 What is the **name** of this figure?

- A triangle
- B trapezoid
- C square
- D parallelogram

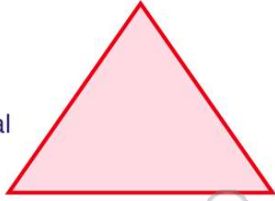




ANSWER KEY

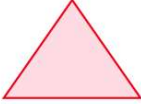


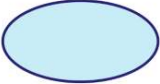
What is the **name** of this **polygon**?

- A square
- B pentagon
- C triangle
- D quadrilateral



(C)

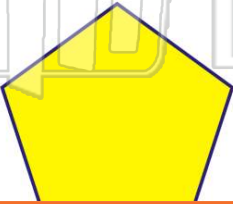
Which picture is a **triangle**?

- A 
- B 
- C 
- D 

(a)

What is a **five-sided figure** called?

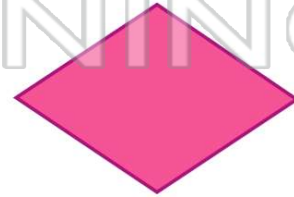
- A triangle
- B square
- C hexagon
- D pentagon



(d)

What is **name** of the following type of **quadrilateral**?

- A square
- B rhombus
- C rectangle
- D trapezoid







(b)



PREVIEW

Please [Sign In](#) or [Sign Up](#) to download the printable version of this worksheet

Which one of the following is a **quadrilateral**?

- A 
- B 
- C 
- D 

(C)

What is the **name** of this figure?

- A triangle
- B trapezoid
- C square
- D parallelogram



(b)