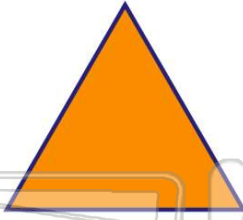




Name \_\_\_\_\_ Class \_\_\_\_\_ Date \_\_\_\_\_

1 What is the name of a **three-sided figure**?

- A hexagon
- B square
- C rhombus
- D triangle




2 What is the **name** of this figure?

- A triangle
- B rectangle
- C square
- D pentagon



3 Which one of the following is a **rectangle**?



4 What is a **four-sided figure** called?

- A quadrilateral
- B pentagon
- C triangle
- D octagon



## PREVIEW

Please [Sign In](#) or [Sign Up](#) to download the printable version of this worksheet

- A true
- B false



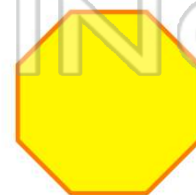
9 is a \_\_\_\_\_.

- A quadrilateral
- B pentagon
- C triangle
- D diamond

10 An **octagon** is an **eight-sided figure**.

True or false?

- A true
- B false






## ANSWER KEY

What is the name of a **three-sided figure**?

- A hexagon
- B square
- C rhombus
- D triangle



(d)

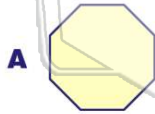
What is the **name** of this figure?

- A triangle
- B rectangle
- C square
- D pentagon



(c)

Which one of the following is a **rectangle**?



C



(c)



D



What is a **four-sided figure** called?

- A quadrilateral
- B pentagon
- C triangle
- D octagon



(a)

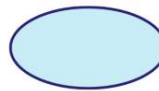


## PREVIEW

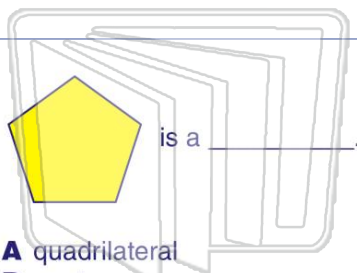
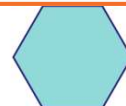
Please [Sign In](#) or [Sign Up](#) to download the printable version of this worksheet



B



D



- A quadrilateral
- B pentagon
- C triangle
- D diamond

(b)

An **octagon** is an **eight-sided figure**.

True or false?

- A true
- B false



(a)