



Name _____ Class _____ Date _____

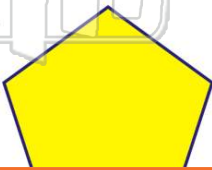
1 A quadrilateral with sides that are all equal is called a _____.

- A pentagon
- B trapezoid
- C square
- D triangle

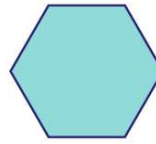


3 A pentagon is a quadrilateral. True or false?

- A true
- B false

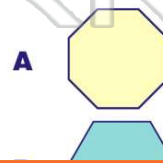


2 _____ is a _____.



- A triangle
- B pentagon
- C octagon
- D hexagon

4 Which of the following is an octagon?



5



PREVIEW

Please [Sign In](#) or [Sign Up](#) to download the printable version of this worksheet

7

- B triangle
- C square
- D pentagon

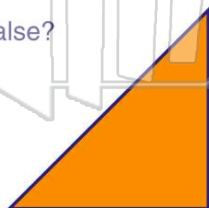


- A true
- B false



9 A triangle is a quadrilateral. True or false?

- A true
- B false



10 _____ is a _____.



- A square
- B pentagon
- C triangle
- D hexagon



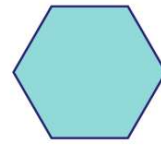
ANSWER KEY

A quadrilateral with sides that are all equal is called a _____.

- A pentagon
- B trapezoid
- C square
- D triangle



(c)



is a _____.

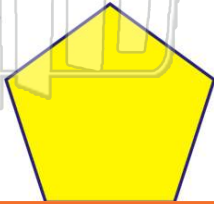
(d)

- A triangle
- B pentagon
- C octagon
- D hexagon

A pentagon is a quadrilateral.

True or false?

- A true
- B false



(b)

Which of the following is an octagon?



(a)



PREVIEW

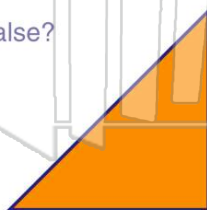
Please [Sign In](#) or [Sign Up](#) to download the printable version of this worksheet

- C square
- D pentagon

A triangle is a quadrilateral.

True or false?

- A true
- B false



(b)



is a _____.

(c)

- A square
- B pentagon
- C triangle
- D hexagon