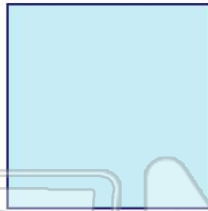




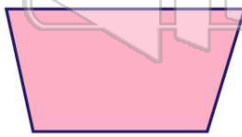
Name _____ Class _____ Date _____

1 The following shape is a _____.

- A square
- B rectangle
- C trapezoid
- D parallelogram

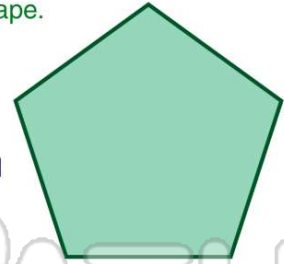


3 A _____ has only **one** pair of parallel sides.



2 Identify this shape.

- A octagon
- B pentagon
- C hexagon
- D quadrilateral



4 A _____ has **6** sides.

- A hexagon
- B pentagon
- C octagon
- D triangle



PREVIEW

Please [Sign In](#) or [Sign Up](#) to download the printable version of this worksheet

7

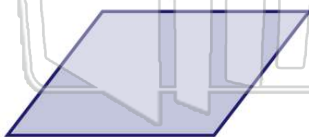
- B similar
- C exactly the same size
- D different shapes



- B trapezoid
- C rhombus
- D rectangle



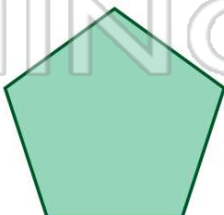
9 Name this shape.



- A square
- B rectangle
- C trapezoid
- D parallelogram

10 A _____ has **5** sides.

- A triangle
- B octagon
- C hexagon
- D pentagon





ANSWER KEY

The following shape is a _____.

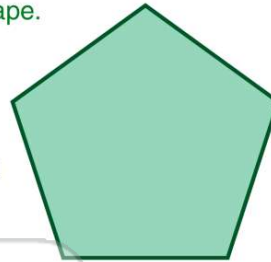
- A square
- B rectangle
- C trapezoid
- D parallelogram



(a)

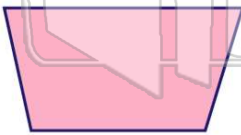
Identify this shape.

- A octagon
- B pentagon
- C hexagon
- D quadrilateral



(b)

A _____ has only **one** pair of parallel sides.

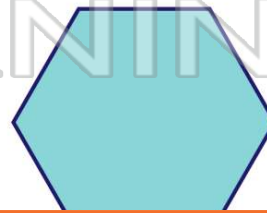


- A square
- C trapezoid

(c)

A _____ has **6** sides.

- A hexagon
- B pentagon
- C octagon
- D triangle



(a)



PREVIEW

Please [Sign In](#) or [Sign Up](#) to download the printable version of this worksheet

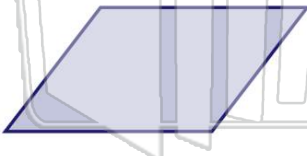
- C exactly the same size
- D different shapes



- C rhombus
- D rectangle



Name this shape.



- A square
- B rectangle
- C trapezoid
- D parallelogram

(d)

A _____ has **5** sides.

- A triangle
- B octagon
- C hexagon
- D pentagon



(d)