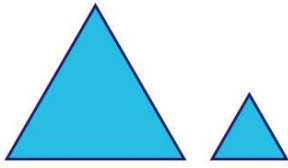




Name _____ Class _____ Date _____

1 These figures are _____.



- A congruent
- B similar

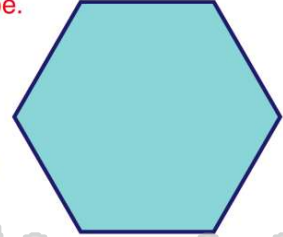
3 These figures are **congruent**.

- A true
- B false



2 Name this shape.

- A octagon
- B pentagon
- C hexagon
- D quadrilateral



4 Which two figures are **congruent**?



- A triangles 1 and 2
- B triangles 2 and 3

5




PREVIEW

Please [Sign In](#) or [Sign Up](#) to download the printable version of this worksheet

7

- A octagons
- B pentagons
- C hexagons
- D quadrilaterals

B false



9

A(n) _____ is a **quadrilateral** with **two pairs of parallel sides**.

- A trapezoid
- B octagon
- C triangle
- D parallelogram



10

A _____ has **3 sides**.

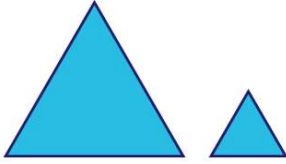
- A pentagon
- B hexagon
- C triangle
- D quadrilateral





ANSWER KEY

These figures are _____.

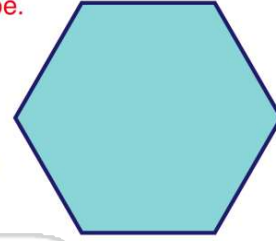


- A congruent
- B similar

(b)

Name this shape.

- A octagon
- B pentagon
- C hexagon
- D quadrilateral



(c)

These figures are **congruent**.

- A true
- B false



(a)

Which two figures are **congruent**?



- A triangles 1 and 2
- B triangles 2 and 3
- C triangles 1 and 4

(d)



PREVIEW

Please [Sign In](#) or [Sign Up](#) to download the printable version of this worksheet

- A octagons
- B pentagons
- C hexagons
- D quadrilaterals



A(n) _____ is a **quadrilateral** with two pairs of parallel sides.

- A trapezoid
- B octagon
- C triangle
- D parallelogram



(d)

A _____ has 3 sides.

- A pentagon
- B hexagon
- C triangle
- D quadrilateral



(c)