



Name _____ Class _____ Date _____

1 How many **rides** are included in this graph?

Favorite Rides

A 3
B 4
C 5
D 6

Ride	# of Riders
Ferris Wheel	20
Roller Coaster	40
Log Ride	10
Merry-Go-Round	30

2 How many people rode the **Log Ride**?

A 10
B 20
C 30
D 40

3 Which is the **most popular** ride?

A Log Ride
B Merry-Go-Round
C Roller Coaster
D Ferris Wheel

4 How many **more** rode the **Merry-Go-Round** than the **Ferris Wheel**?

A 15
B 30
C 20
D 10

Ride	# of Riders
Ferris Wheel	20
Roller Coaster	40
Log Ride	10
Merry-Go-Round	30

5

PREVIEW

7 Please [Sign In](#) or [Sign Up](#) to download the printable version of this worksheet

8 How many **more** home runs did the **red team** hit than the **blue team**?

A 5
B 15
C 20
D 10

9 How many **more** home runs did the **green team** hit than the **red team** and **blue team** combined?

A 20
B 10
C 30
D 50

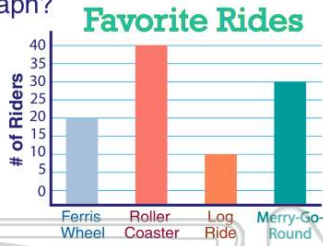
Team	# of Home Runs
Red	20
Blue	10
Green	30



ANSWER KEY

How many **rides** are included in this graph?

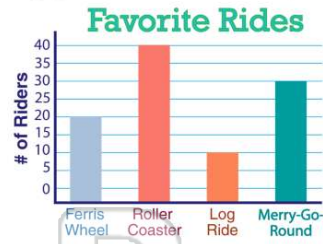
- A 3
- B 4
- C 5
- D 6



(b)

How many **people** rode the **Log Ride**?

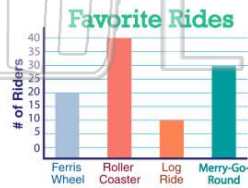
- A 10
- B 20
- C 30
- D 40



(a)

Which is the **most popular** ride?

- A Log Ride
- B Merry-Go-Round
- C Roller Coaster
- D Ferris Wheel



(c)

How many **more** rode the **Merry-Go-Round** than the **Ferris Wheel**?

- A 15
- B 30
- C 20
- D 10




(d)



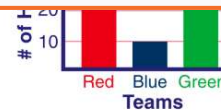
PREVIEW

Please [Sign In](#) or [Sign Up](#) to download the printable version of this worksheet

D 100

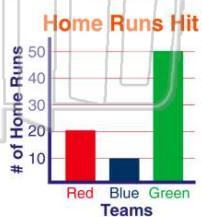


D Orange



How many **more** home runs did the **red team** hit than the **blue team**?

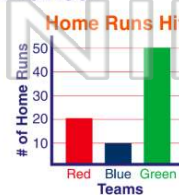
- A 5
- B 15
- C 20
- D 10



(d)

How many **more** home runs did the **green team** hit than the **red team** and **blue team** combined?

- A 20
- B 10
- C 30
- D 50



(a)