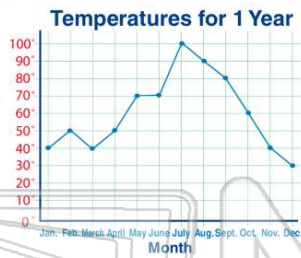




Name _____ Class _____ Date _____

1 Which **month** was the **coldest**?

- A January
- B March
- C December
- D August



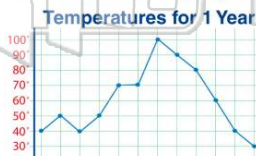
2 Which **month** was the **warmest**?

- A August
- B June
- C July
- D April



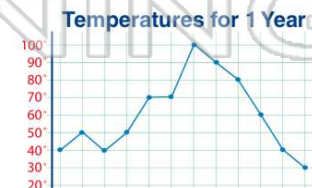
3 **Three months** have the same temperature. **What is the temperature?**

- A 30°
- B 40°
- C 50°
- D 70°



4 How much **warmer** was it in **May** than **October**?

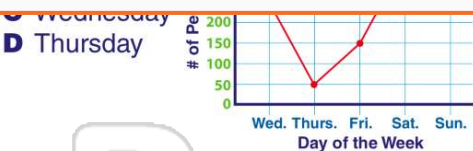
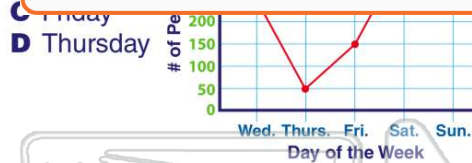
- A 40°
- B 30°
- C 20°
- D 10°



PREVIEW

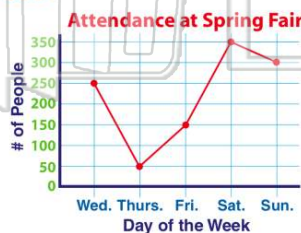
Please [Sign In](#) or [Sign Up](#) to download the printable version of this worksheet

7



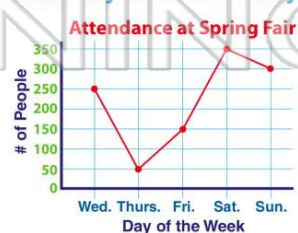
9 On which day was the attendance **greater than 300**?

- A Saturday
- B Sunday
- C Friday
- D Thursday



10 How many more people attended the fair on **Wednesday** than on **Friday**?

- A 250
- B 200
- C 150
- D 100

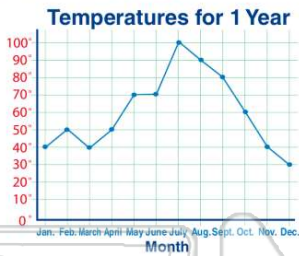




ANSWER KEY

Which **month** was the **coldest**?

- A January
- B March
- C December
- D August



(C)

Which **month** was the **warmest**?

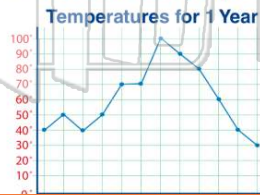
- A August
- B June
- C July
- D April



(C)

Three months have the same temperature. What is the temperature?

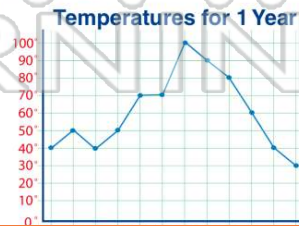
- A 30°
- B 40°
- C 50°
- D 70°



(b)

How much **warmer** was it in **May** than **October**?

- A 40°
- B 30°
- C 20°
- D 10°



(d)

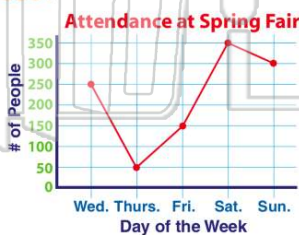


PREVIEW

Please [Sign In](#) or [Sign Up](#) to download the printable version of this worksheet

On which day was the attendance **greater than 300**?

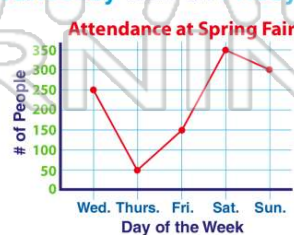
- A Saturday
- B Sunday
- C Friday
- D Thursday



(a)

How many more people attended the fair on **Wednesday** than on **Friday**?

- A 250
- B 200
- C 150
- D 100



(d)