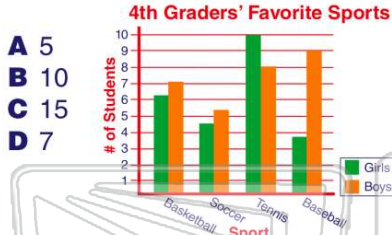




Name _____ Class _____ Date _____

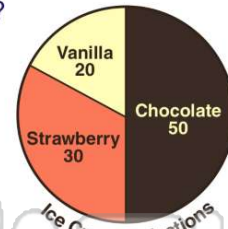
1 How many **girls** voted for **tennis** as their favorite sport?



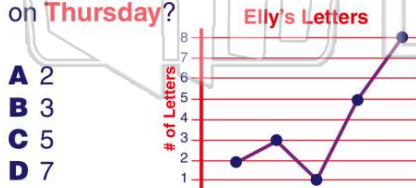
- A 5
- B 10
- C 15
- D 7

2 Which **flavor** of ice cream was selected the **most** often?

- A chocolate
- B vanilla
- C strawberry



3 How many letters did Elly receive on **Thursday**?



- A 2
- B 3
- C 5
- D 7

4 How much does it cost to buy an **apple** at Sam's Snack Shop?

- A \$0.50
- B \$0.75
- C \$0.25
- D \$0.45

Menu at Sam's Snack Shop

Food Item	Price
drinks	\$ 0.50
chips	\$ 0.75

5

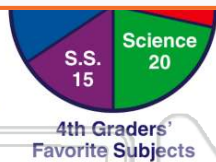


PREVIEW

Please [Sign In](#) or [Sign Up](#) to download the printable version of this worksheet

7

- A Math
- B Science
- C Social Studies
- D Language Arts



- A \$1.25
- B \$1.35
- C \$1.40
- D \$1.30



9

According to the following chart, **Devon's** birthday is in _____.

- A November
- B April
- C December
- D June

Name	Grade	Birthday Month
Amy	3rd	November
Becky	4th	April
Carl	5th	June
Devon	6th	December

10

According to this pictograph, how many goals did **Fred** score in **July**?

- A 4
- B 8
- C 6
- D 12

Goals Scored in July

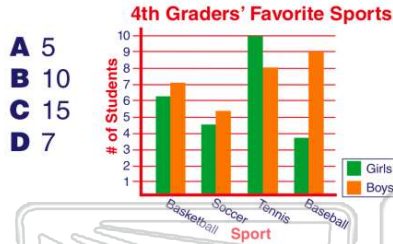


1 icon = 2 goals



ANSWER KEY

How many **girls** voted for **tennis** as their favorite sport?

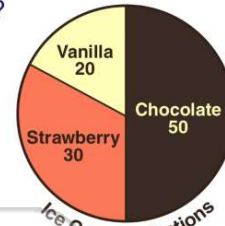


- A 5
- B 10
- C 15
- D 7

(b)


Which **flavor** of ice cream was selected the **most** often?

- A chocolate
- B vanilla
- C strawberry



(a)

How many letters did Elly receive on **Thursday**?



- A 2
- B 3
- C 5
- D 7

(c)

How much does it cost to buy an **apple** at Sam's Snack Shop?

- A \$0.50
- B \$0.75
- C \$0.25
- D \$0.45

Menu at Sam's Snack Shop

Food Item	Price
drinks	\$ 0.50
chips	\$ 0.75
apples	\$ 0.25

(c)



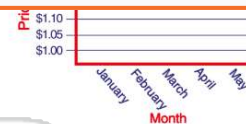
PREVIEW

Please [Sign In](#) or [Sign Up](#) to download the printable version of this worksheet

- C Social Studies
- D Language Arts



- C \$1.40
- D \$1.30



According to the following chart, **Devon's** birthday is in _____.

- A November
- B April
- C December
- D June

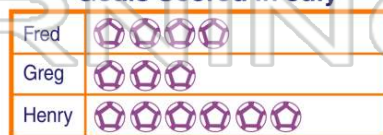
Name	Grade	Birthday Month
Amy	3rd	November
Becky	4th	April
Carl	5th	June
Devon	6th	December

(c)

According to this pictograph, how many goals did Fred score in **July**?

- A 4
- B 8
- C 6
- D 12

Goals Scored in July



(b)

⬡ = 2 goals